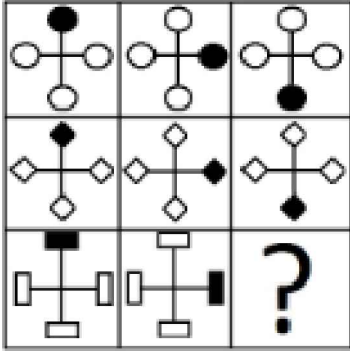




## Test-9

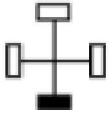
12.



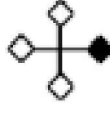
Yukarıdaki şekiller soldan sağa belli bir kurala göre dizilmiştir.

Buna göre "?" olan kutucuğa aşağıdakilerden hangisi gelmelidir ?

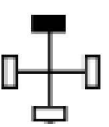
A)



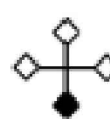
B)



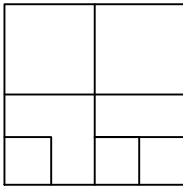
C)



D)



13.



Yukarıda verilen şekilede kaç tane kare olmayan dikdörtgen vardır?

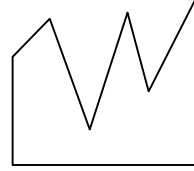
A) 8

B) 6

C) 5

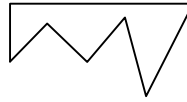
D) 7

14.



Yukarıdaki şekil aşağıdaki şekillerden hangisi ile birleşirse bir kare oluşur ?

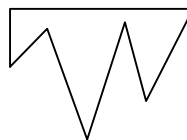
A)



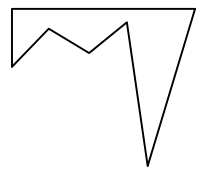
B)



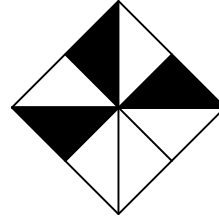
C)



D)

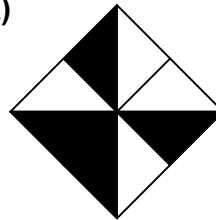


15.




Yukarıdaki şeklin negatifi aşağıdaki şekillerden hangisinde verilmiştir ?

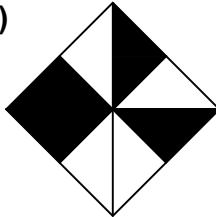
A)



B)



C)



D)

