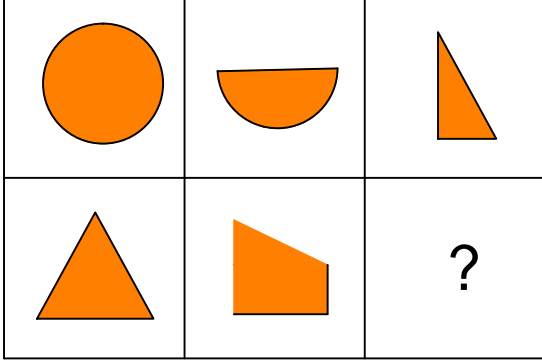




Ad : _____
Soyad : _____
Sınıf: _____ No: _____

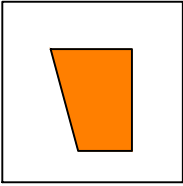
Test-9

9.

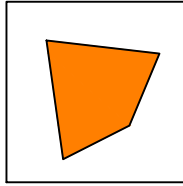


Yukarıda verilen şekiller soldan sağa belli bir kurala göre sıralanmıştır.
Buna göre "?" kutucuğa aşağıdakilerden hangisi gelmelidir?

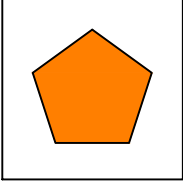
A)



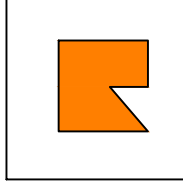
B)



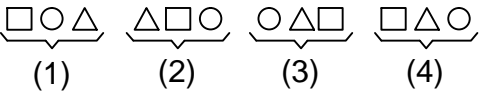
C)



D)



10.



Yukarıda verilen dizi bir sıraya göre dizilmiştir.
Dizilerden sırayı bozan hangisidir?


A) 1

B) 2


C) 3

D) 4

11.



Yukarıda verilen şekili oluşturabilmek için aşağıdaki şekillerden hangi ikisi tamamen kullanılmalıdır ?



A) 1 ve 2

B) 1 ve 3

C) 3 ve 4

D) 1 ve 4