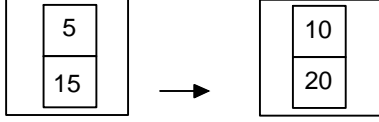




Ad : \_\_\_\_\_  
Soyad : \_\_\_\_\_  
Sınıf: \_\_\_\_\_ No: \_\_\_\_\_

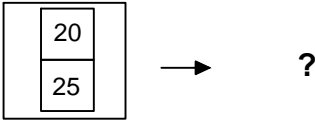
## Test-9

5.



1. Şekil

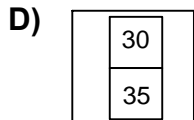
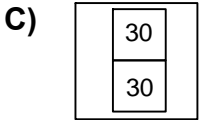
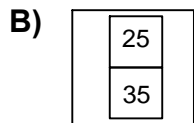
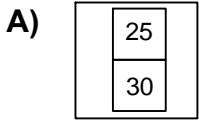
2. Şekil



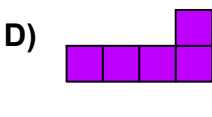
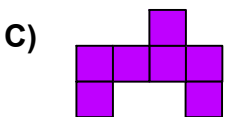
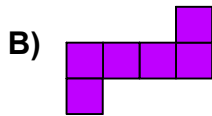
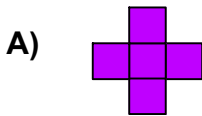
3. Şekil

1. şekil ve 2. şekil arasında bir ilişki bulunmaktadır.


**Benzer ilişki 3. şekil ile hangisi arasında vardır**




6. Yukarıda verilen şekildedeki hangisi bir küpün açılımıdır ?



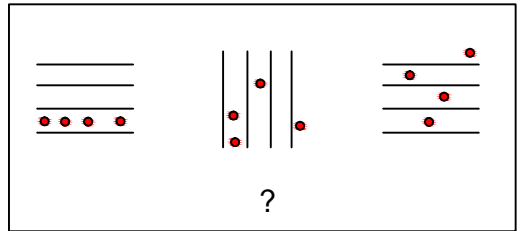
7.



Yukarıdaki resmin bir parçası çıkarılmıştır.  
**Çıkarılan parça aşağıdakilerden hangisidir?**



8.



Yukarıdaki şekil grubunda ortak bir özellik vardır.

**Bu özellik aşağıdakilerden hangisinde vardır?**

