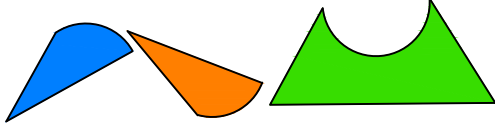




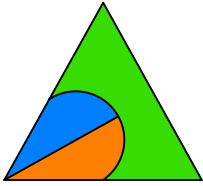
Test-9

1.

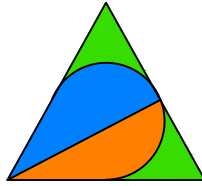


Yukarıda verilen parçalar ile aşağıdaki şekillerden hangisi oluşturulabilir ?

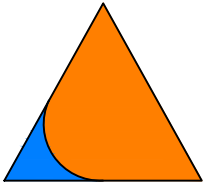
A)



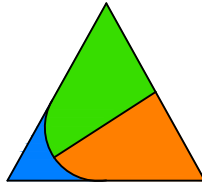
B)



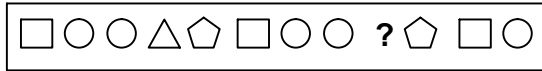
C)



D)



2.



Yukarıda verilen dizi bir sıraya göre dizilmiştir.
Buna göre "?" yerne hangi şekil gelmelidir?

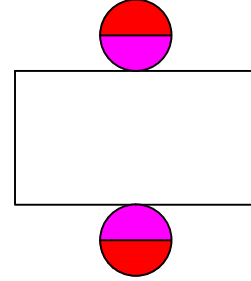
A) □

B) ○

C) △


D) ⬠

3.

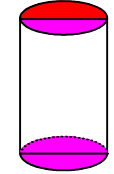


Yukarıda verilen şeklin kapalı durumu aşağıdakilerden hangisidir ?


A)



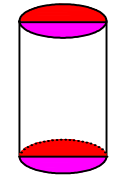
B)



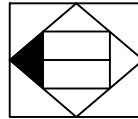
C)



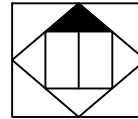
D)



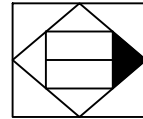
4.



1. Şekil



2. Şekil



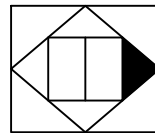
3. Şekil

?

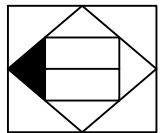
4. Şekil

Yukarıda verilen dizi bir sıraya göre dizilmiştir.
Buna göre "?" yerne hangi şekil gelmelidir?

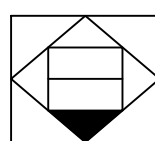
A)



B)



C)



D)

