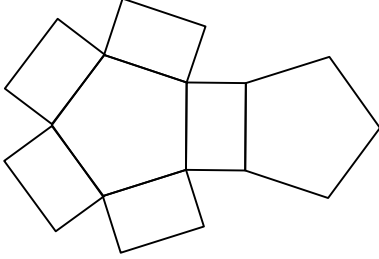




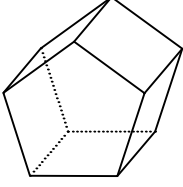
Test-8

8.

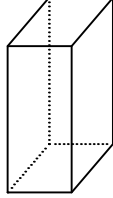


Yukarıda verilen şeklin kapalı durumu aşağıdakilerden hangisidir ?

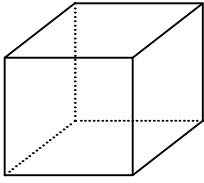
A)



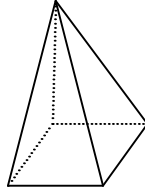
B)



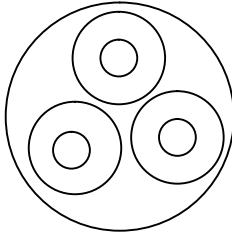
C)



D)



9.



Yukarıda verilen şekilede kaç tane daire vardır?


A) 9

B) 6

C) 8

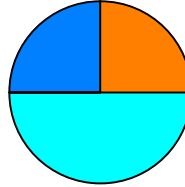
D) 7

10.

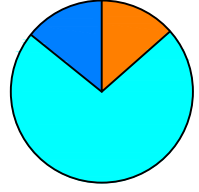


Yukarıda verilen parçalar ile aşağıdaki şekillerden hangisi oluşturulabilir ?

A)



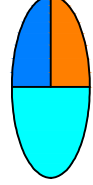
B)



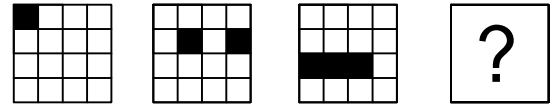
C)



D)




11.



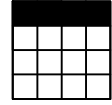
Yukarıda verilen şekiller bir kurala göre sonlu bir şekil dizisi oluşturmaktadır.

Buna göre "?" yerine hangi seçenekteki şekil getirilmelidir?


A)



B)



C)



D)

