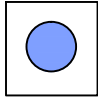





Test-7

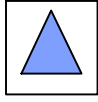
5.



1. Şekil



2. Şekil



3. Şekil

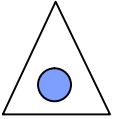


?

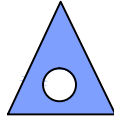
1. şekil ve 2. şekil arasında bir ilişki bulunmaktadır.

Benzer ilişki 3. şekil ile hangisi arasında vardır

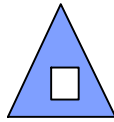
A)



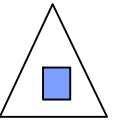
B)



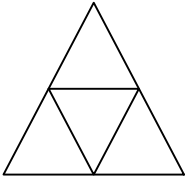
C)



D)



6.



Yukarıda verilen şekilede kaç tane üçgen vardır?

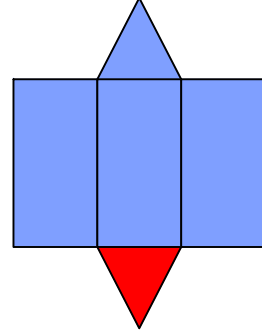
A) 4

B) 6

C) 5

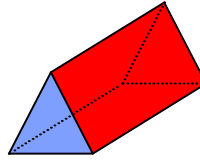
D) 7

7.

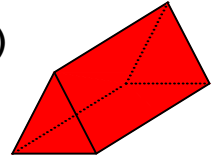


Yukarıda verilen şeklin kapalı durumu aşağıdakilerden hangisidir ?

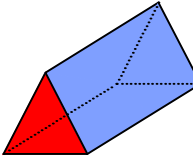
A)



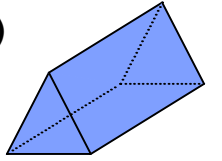
B)



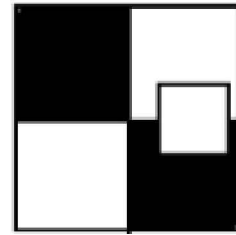
C)



D)



8.




Yukarıdaki resmin bir parçası çıkarılmıştır. Çıkarılan parça aşağıdakilerden hangisidir?

A)



B)



C)



D)

