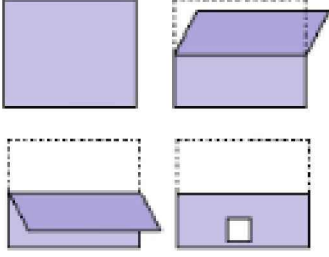




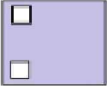
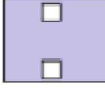


Ad : _____
Soyad : _____
Sınıf: _____ No: _____

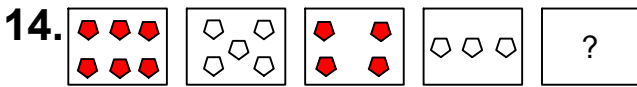
Test-6

13.



Kağıt yukarıdaki şekildeki gibi katlanıp bir delik çalıyor.
Kağıt geri açıldığında oluşan yeni şekil aşağıdakilerden hangisi olur?

- A)  B) 
- C)  D) 



Yukarıda verilen dizi bir sıraya göre dizilmiştir.

Buna göre "?" yerine aşağıdakilerden hangisi gelmelidir?

- A)  B) 
- C)  D) 

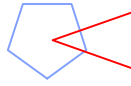
15.



1. Şekil



2. Şekil

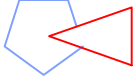
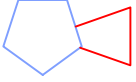

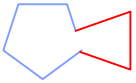


3. Şekil

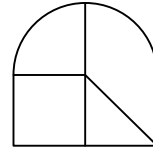
?

1. şekil ve 2. şekil arasında bir ilişki bulunmaktadır.


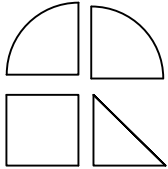

Benzer ilişki 3. şekil ile hangisi arasında vardır

- A)  B) 
- C)  D) 

16.



Yukarıda verilen şeklin oluşması için gerekli parçalar hangi seçenekte verilmiştir?

- A)  B) 
- C)  D) 