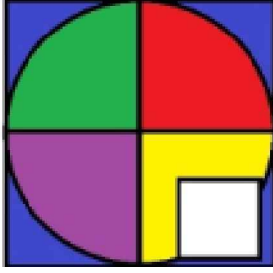








Test-6

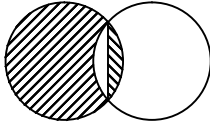
5.



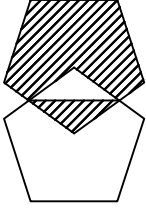
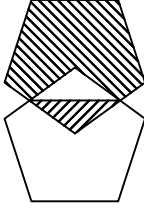
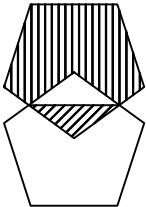
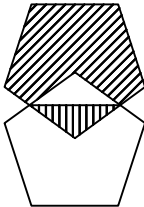
Yukarıdaki resmin bir parçası çıkarılmıştır.
Çıkarılan parça aşağıdakilerden hangisidir?

- A)  B) 
- C)  D) 

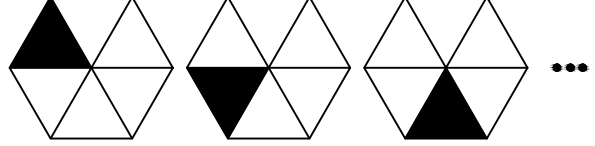
6.



Yukarıda örnek verilen şekile benzerlik gösteren şekil hangisidir?

- A)  B) 
- C)  D) 

7.



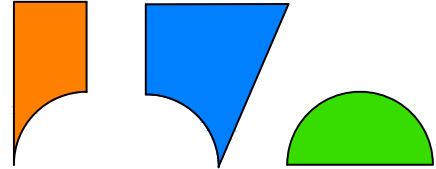
1. Şekil 2. Şekil 3. Şekil

Yukarıda verilen şekil dizisi belli bir kurala göre sıralanmıştır.

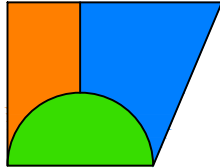
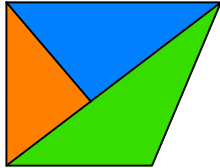
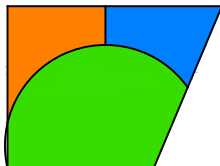
Bu kurala göre birinci şekil kaçınıcı şekilde yenilenir?

- A) 3 B) 4
C) 5 D) 6

8.



Yukarıda verilen parçalar ile aşağıdaki şekillerden hangisi oluşturulabilir ?

- A)  B) 
- C)  D) 