
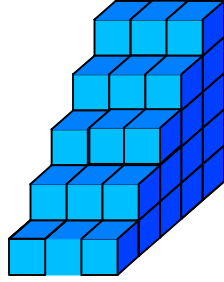




Ad : _____
Soyad : _____
Sınıf: _____ No: _____

Test-5

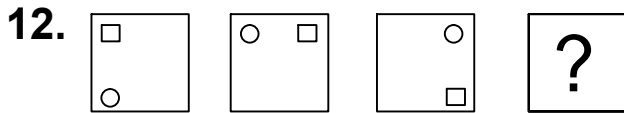
11.  → 1 birim küp



Yukarıda verilen şekil aynı büyüklükteki küp bloklardan oluşmaktadır.

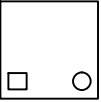
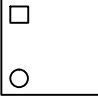
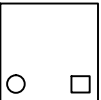
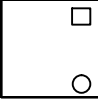
Şekilde toplam kaç küp vardı?

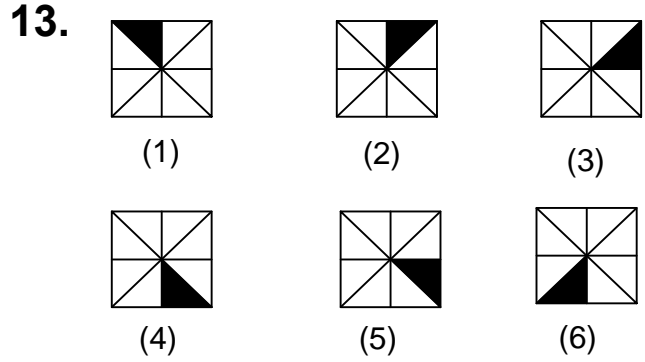
- A) 39 B) 41
C) 45 D) 48



Yukarıda verilen şekiller bir kurala göre sonlu bir şekil dizisi oluşturmaktadır.

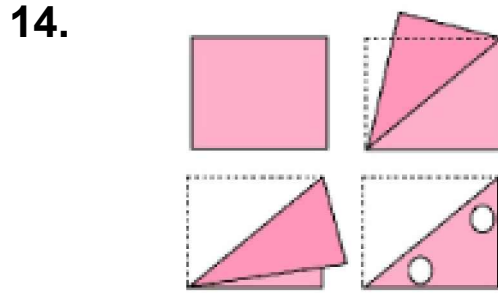
Buna göre "?" yerine hangi seçenekteki şekil getirilmelidir?

- A)  B) 
C)  D) 



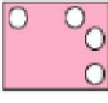
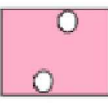
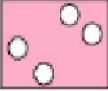
Yukarıda numaralanmış şekillerin sonlu bir dizi oluşturmaları için hangi ikisi yer değiştirilmelidir?

- A) 4 - 6 B) 3 - 5
C) 3 - 6 D) 4 - 5



Kağıt yukarıdaki şekildeki gibi katlanıp bir delik çalıyor.

Kağıt geri açıldığında oluşan yeni şekil aşağıdakilerden hangisi olur?

- A)  B) 
C)  D) 