


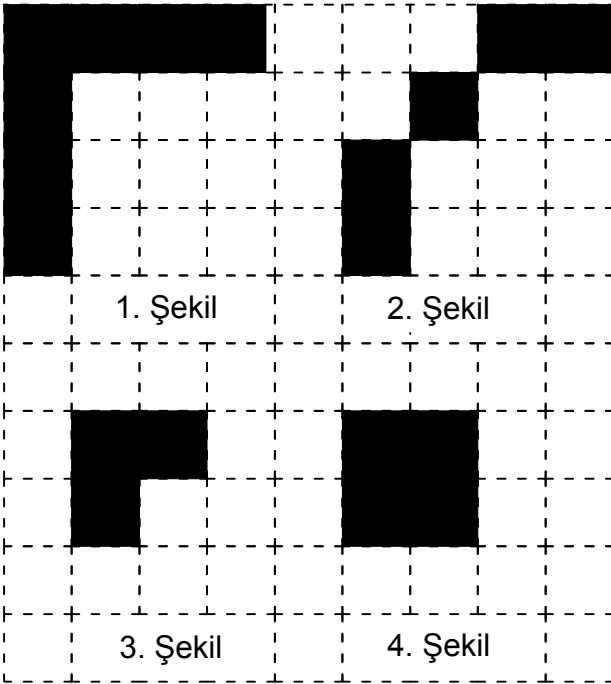


Test-5

5.



Yukarıda verilen şekili oluşturabilmek için aşağıdaki şekillerden hangi ikisi tamamen kullanılmalıdır ?



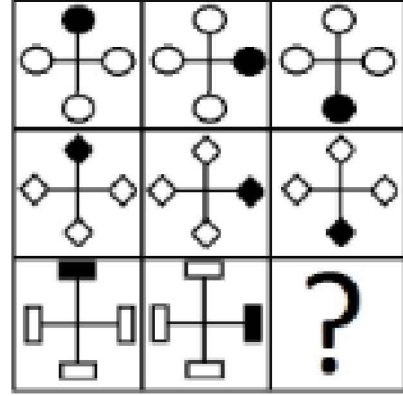
A) 1 ve 3

B) 1 ve 2

C) 3 ve 4

D) 1 ve 4


6.



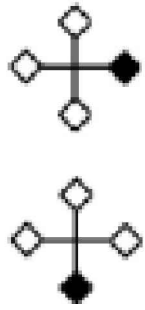
Yukarıdaki şekiller soldan sağa belli bir kurala göre dizilmiştir.

Buna göre "?" olan kutucuğa aşağıdakilerden hangisi gelmelidir ?

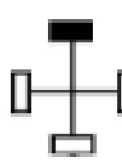
A)



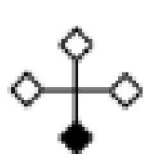
B)



C)

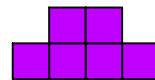


D)

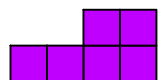


7. Yukarıda verilen şekildedir hangisi bir küpün açılımıdır ?

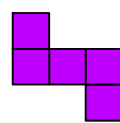
A)



B)



C)



D)

