




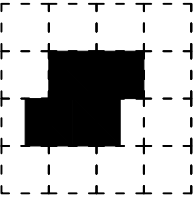
Test-4

9.




Aşağıdaki şekillerden hangisi yukarıda verilen şekil ile aynıdır ?


A)




B)



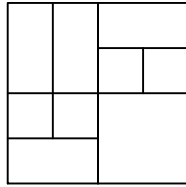
C)



D)



10.



Yukarıda verilen şekilede kaç tane kare vardır?


A) 7

B) 8

C) 9


D) 10

11.

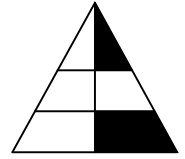


Yukarıdaki şeklin negatifi aşağıdaki şekillerden hangisinde verilmiştir ?

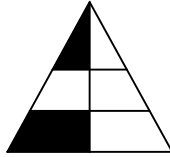
A)




B)



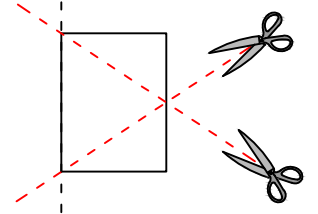
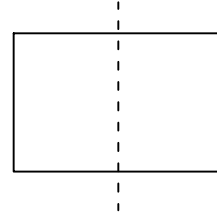
C)



D)



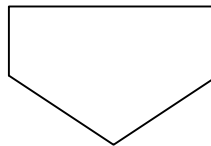
12.



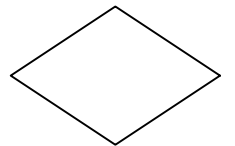
Şekil-1'deki kağıt Şekil-2'deki gibi katlanıp kesikli çizgilerle gösterilen yerlerinden kesiliyor.

Kağıt katlandığı yerden tekrar açıldığında aşağıdaki şekillerden hangisi meydana gelir ?

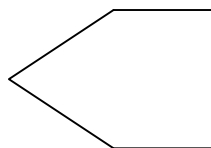
A)



B)



C)



D)

