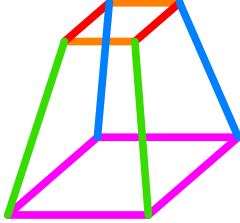




Ad : _____
Soyad : _____
Sınıf : _____ No : _____

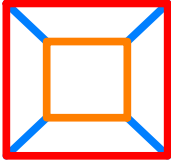

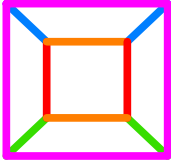

Test-36

13.

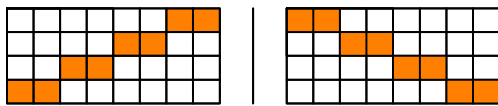
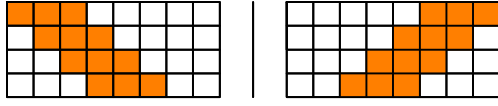
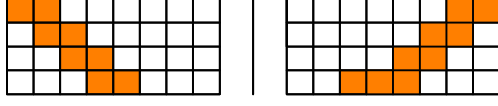
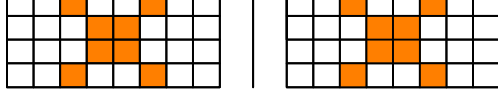


Yukarıda üç boyutlu bir geometrik cismin resmi gözükmemektedir.

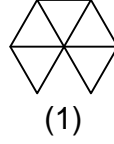
Bu şeklin yukarıdan görünüşü aşağıdaki şekillerden hangisidir?

- A)  B) 
- C)  D) 

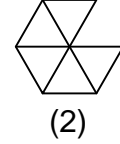
14. Aşağıdakilerden hangisinde 1. şekil'in aynadan yansıması 2. şekilde yanlış verilmiştir.?

- A) 
- B) 
- C) 
- D) 

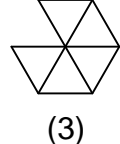
15.



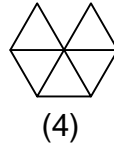
(1)



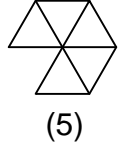
(2)



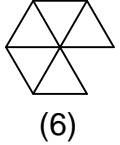
(3)



(4)



(5)

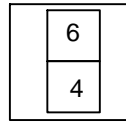


(6)

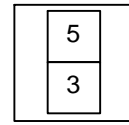
Yukarıda numaralanmış şekillerin sonlu bir dizi oluşturmaları için hangi ikisi yer değiştirilmelidir?

- A) 2 - 6 B) 2 - 5
C) 3 - 6 D) 4 - 6

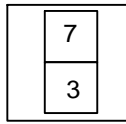
16.



1. Şekil



2. Şekil



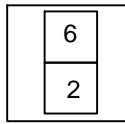
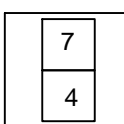
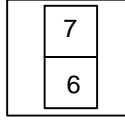
3. Şekil



?

1. şekil ve 2. şekil arasında bir ilişki bulunmaktadır.

Benzer ilişki 3. şekil ile hangisi arasında vardır

- A)  B) 
- C)  D) 