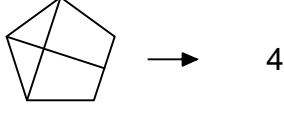
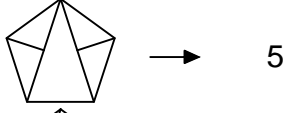
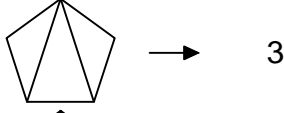


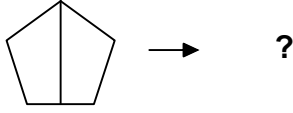


Test-35

12.



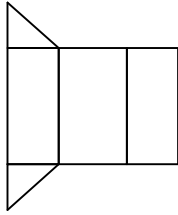
Yukarıdaki şekil - sayı eşleşmesine göre



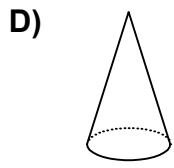
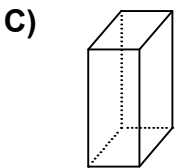
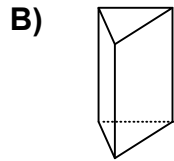
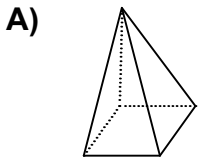
eşleşmesinde " ? " yerine hangisi getirilmelidir?

- A) 1 B) 2
C) 3 D) 4


13.






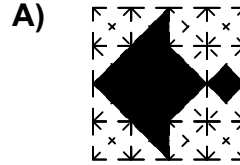
Yukarıda verilen şeklin kapalı durumu aşağıdakilerden hangisidir ?



14.



Aşağıdaki şekillerden hangisi yukarıda verilen şekil ile aynıdır ?




15.



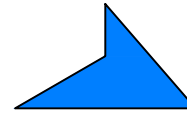
Yukarıda verilen şekili elde edebilmek için aşağıdaki şekillerden hangi ikisi birleştirilmelidir?



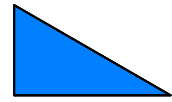
1. Şekil



2. Şekil



3. Şekil



4. Şekil

- A) 1 ve 2 B) 3 ve 2
C) 1 ve 3 D) 2 ve 4