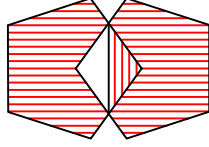




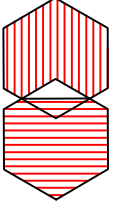
## Test-35

5.

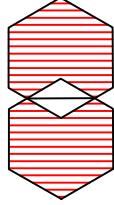


Yukarıda örnek verilen şekile benzerlik gösteren şekil hangisidir?

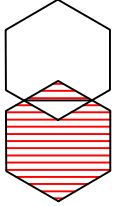
A)



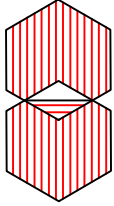
B)



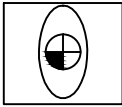
C)



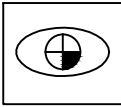
D)



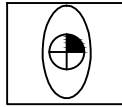
6.



1. Şekil



2. Şekil



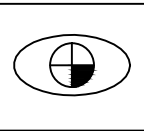
3. Şekil

?

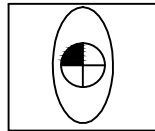
4. Şekil

Yukarıda verilen dizi bir sıraya göre dizilmiştir. Buna göre "?" yerine hangi şekil gelmelidir?

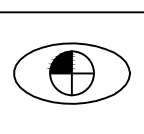
A)



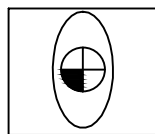
B)



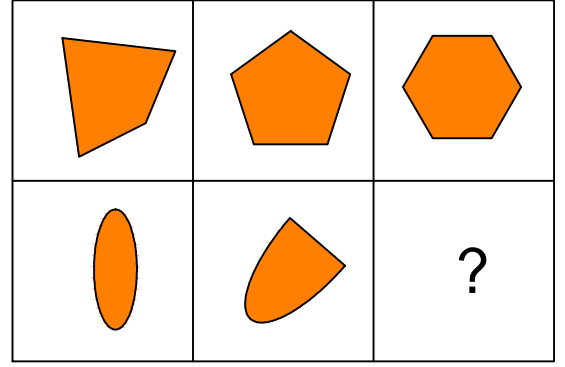
C)



D)




7.




Yukarıda verilen şekiller soldan sağa belli bir kurala göre sıralanmıştır.

Buna göre "?" kutucuğa aşağıdakilerden hangisi gelmelidir?

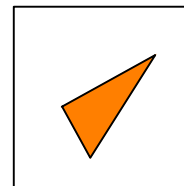
A)



B)



C)



D)

