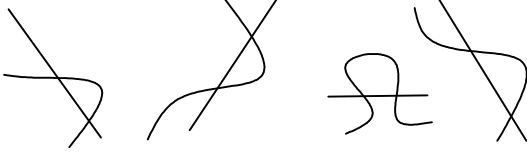




Test-32

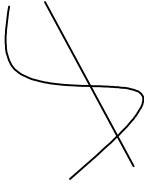
10.



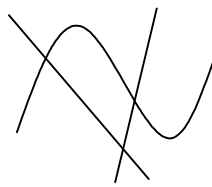
Yukarıdaki şekiller arasında ortak bir özellik vardır.

Bu ortak özellik aşağıdakilerden hangisinde mevcuttur ?

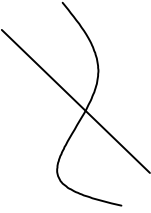
A)



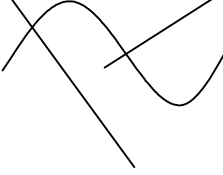
B)



C)



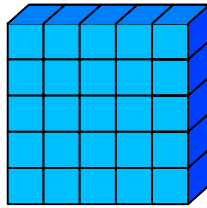
D)



11.



1 birim
küp



Yukarıda verilen şekil aynı büyüklükteki küp bloklardan oluşmaktadır.

Şekilde toplam kaç küp vardı?


A) 26

B) 25

C) 20


D) 30

12.




Aşağıdaki şekillerden hangisi yukarıda verilen şekil ile aynıdır ?


A)



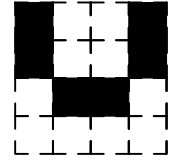
B)



C)



D)



13.



→ 2



→ 4



→ 8

Yukarıdaki şekil - sayı eşleşmesine göre



→ ?

eşleşmesinde " ? " yerine hangisi getirilmelidir?

A) 5

B) 7

C) 6

D) 8