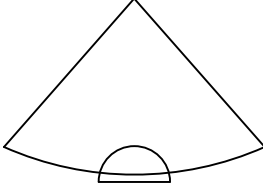




Ad : _____
Soyad : _____
Sınıf: _____ No: _____

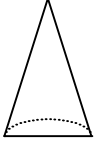
Test-32

6.

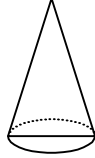


Yukarıda verilen şeklin kapalı durumu aşağıdakilerden hangisidir ?

A)



B)




C)



D)



7.



Yukarıdaki resmin bir parçası çıkarılmıştır.
Çıkarılan parça aşağıdakilerden hangisidir?

A)



B)



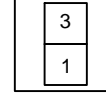
C)



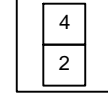
D)



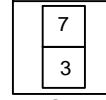
8.



1. Şekil



2. Şekil

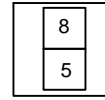


3. Şekil

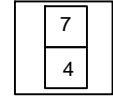
1. şekil ve 2. şekil arasında bir ilişki bulunmaktadır.

Benzer ilişki 3. şekil ile hangisi arasında vardır

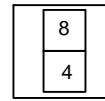
A)



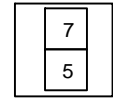
B)



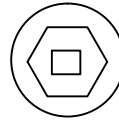
C)



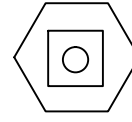
D)



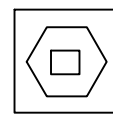
9.



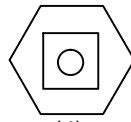
(1)



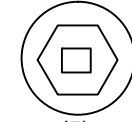
(2)



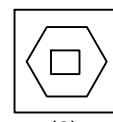
(3)



(4)



(5)



(6)

Yukarıda numaralanmış şekiller ortak özelliklerine göre gruplandırılırsa doğru eşleşme hangileri olur?

A) 1,6 - 2,5 - 3,4

B) 1,6 - 3,5 - 2,4

C) 3,5 - 1,4 - 2,6

D) 1,5 - 2,4 - 3,6