




Ad : \_\_\_\_\_  
Soyad : \_\_\_\_\_  
Sınıf: \_\_\_\_\_ No: \_\_\_\_\_

## Test-32

3.



Yukarıdaki şekiller soldan sağa belli bir kurala göre dizilmiştir.

**Buna göre "?" olan kutucuğa aşağıdakilerden hangisi gelmelidir ?**

A)



B)



C)

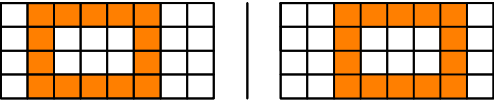


D)

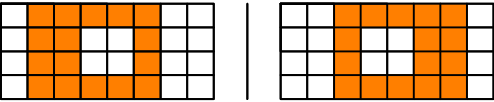


4. Aşağıdakilerden hangisinde 1. şekil'in aynadan yansıması 2. şekilde yanlış verilmiştir.?

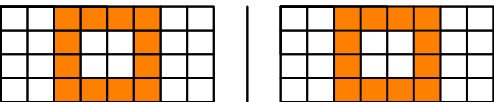
A)



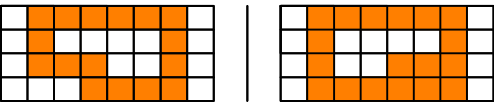
B)



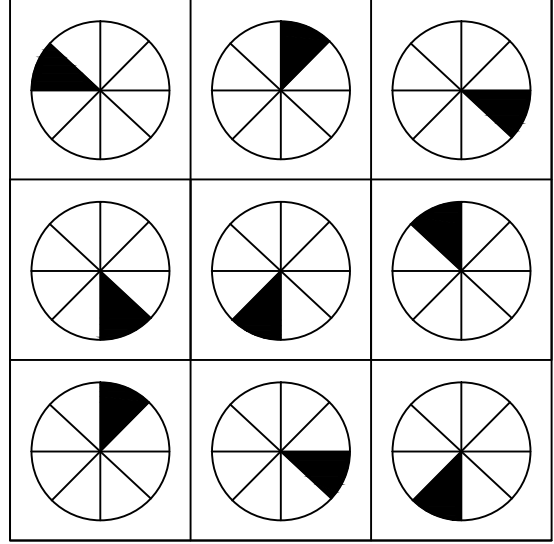
C)



D)



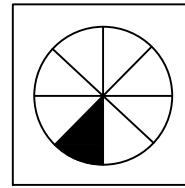
5.



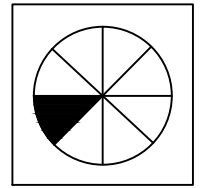
Her sıradaki şekiller belli bir kurala göre dizi oluşturmaktadır.

**Buna göre kuralı bozan şekil aşağıdakilerden hangisinde verilmiştir?**

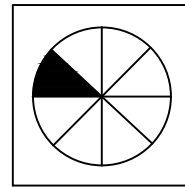
A)



B)



C)



D)

