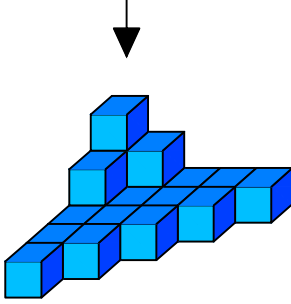




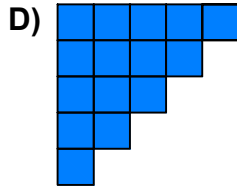
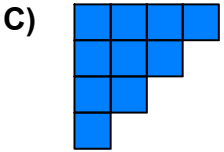
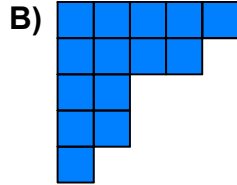

Ad : \_\_\_\_\_  
Soyad : \_\_\_\_\_  
Sınıf: \_\_\_\_\_ No: \_\_\_\_\_

## Test-32


1.




Yukarıda eş birm küplerden oluşan bir şekil  
görülmemektedir.  
Bu şeklin yukarıdan görünüşü  
aşağıdakilerden hangisidir.



2.



Yukarıda verilen şekili oluşturabilmek için  
aşağıdaki şekillerden hangi ikisi tamamen  
kullanılmalıdır ?



A) 1 ve 4

B) 1 ve 3

C) 3 ve 4

D) 1 ve 2