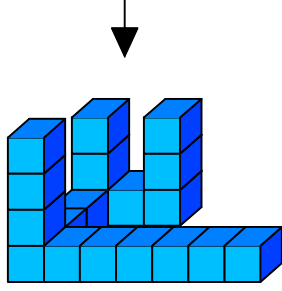




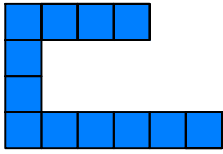
Test-31

12.

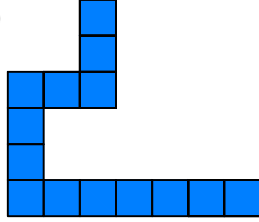


Yukarıda eş birim küplerden oluşan bir şekil görülmektedir.
Bu şeklin yukarıdan görünüşü aşağıdakilerden hangisidir.

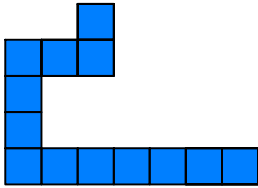
A)



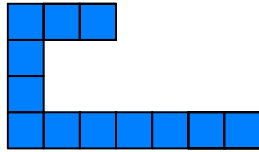
B)



C)

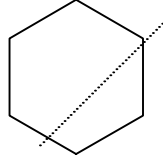


D)

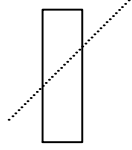


13. Aşağıdaki seçeneklerde verilen şekiller çizgi boyunca katlandığında üst üste gelen (çakışan) şekil hangisidir.

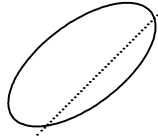
A)



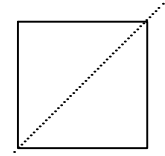
B)




C)



D)




14.




Aşağıdaki şekillerden hangisi yukarıda verilen şekil ile aynıdır ?

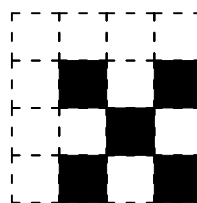
A)



B)



C)



D)

