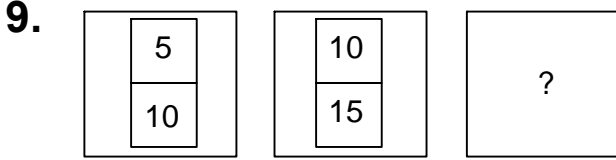




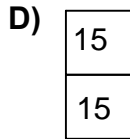
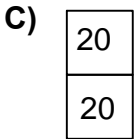
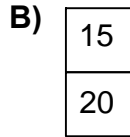
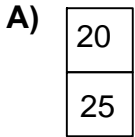
Ad : _____
Soyad : _____
Sınıf: _____ No: _____

Test-31


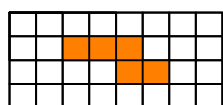
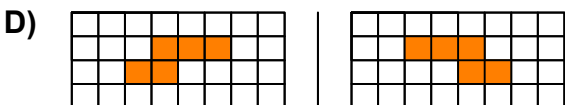
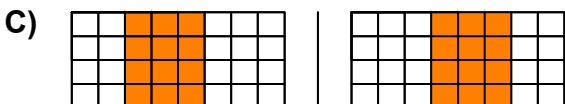
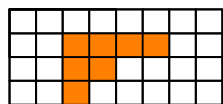
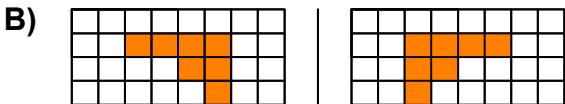
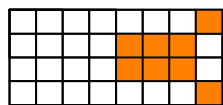
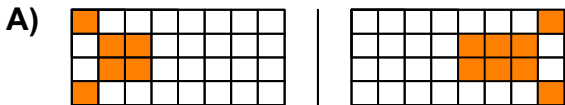


Yukarıda verilen şekiller bir kurala göre dizi oluşturmaktadır.


Buna göre "?" yerine hangi şekil gelmelidir?



10. Aşağıdakilerden hangisinde 1. şekil'in aynadan yansıması 2. şekilde yanlış verilmiştir?



Yukarıda verilen şekili oluşturabilmek için aşağıdaki şekillerden hangi ikisi tamamen kullanılmalıdır ?



A) 1 ve 2

B) 2 ve 3

C) 3 ve 4

D) 1 ve 4