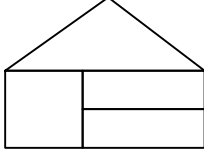


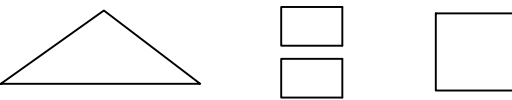
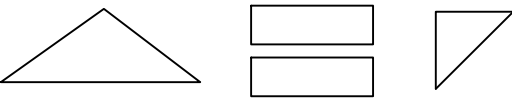
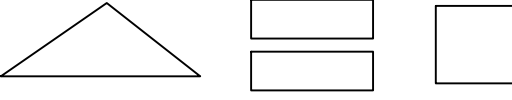
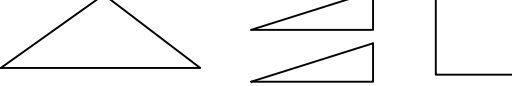


Test-31

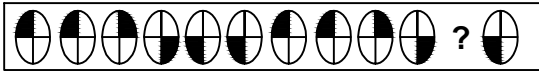
5.



Yukarıda verilen şeklin oluşması için gerekli parçalar hangi seçenekte verilmiştir?

- A) 
- B) 
- C) 
- D) 

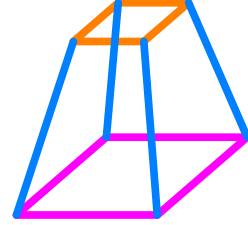
6.



Yukarıda verilen dizi bir sıraya göre dizilmiştir. Buna göre "?" yerne hangi şekil gelmelidir?

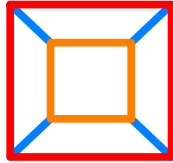
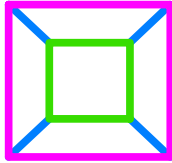
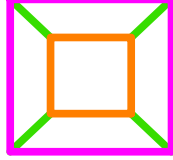
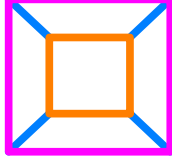
- A)  B) 
- C)  D) 

7.

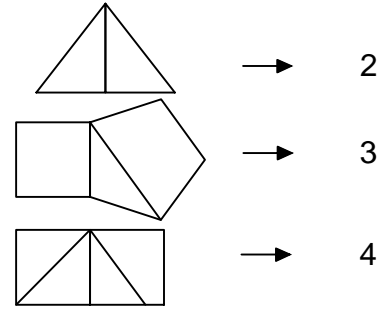


Yukarıda üç boyutlu bir geometrik cismin resmi gözükmemektedir.

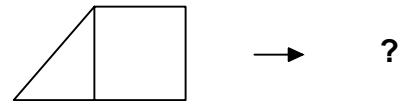
Bu şeklin yukarıdan görünüşü aşağıdaki şekillerden hangisidir?

- A) 
- B) 
- C) 
- D) 

8.



Yukarıdaki şekil - sayı eşleşmesine göre



eşleşmesinde " ? " yerine hangisi getirilmelidir?

- A) 1 B) 3
C) 2 D) 4