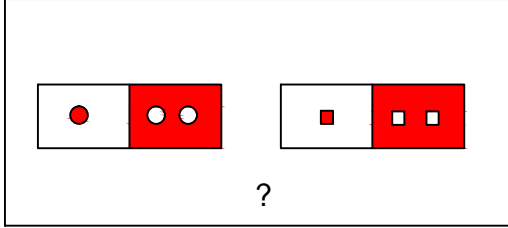




Ad : _____
Soyad : _____
Sınıf: _____ No: _____


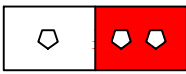


Test-30

13.

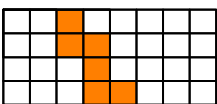
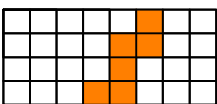
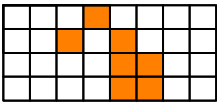
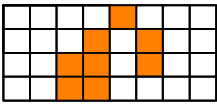
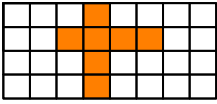
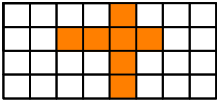




Yukarıdaki şekil grubunda ortak bir özellik vardır.

Bu özellik aşağıdakilerden hangisinde vardır?

- A)  B) 
- C)  D) 

14. Aşağıdakilerden hangisinde 1. şekil'in aynadan yansıması 2. şekilde yanlış verilmiştir?



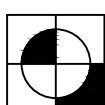
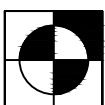
- A)  | 
- B)  | 
- C)  | 
- D)  | 

15.

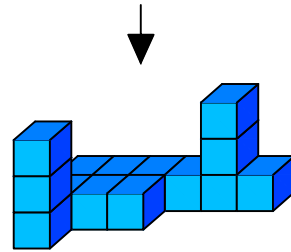


Yukarıda verilen şekiller bir kurala göre sonlu bir şekil dizisi oluşturmaktadır.

Buna göre "?" yerine hangi seçenekteki şekil getirilmelidir?

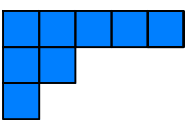
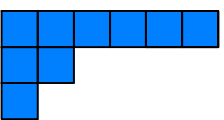
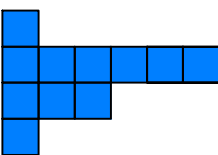
- A)  B) 
- C)  D) 

16.



Yukarıda eş birim küplerden oluşan bir şekil görülmektedir.

Bu şeklin yukarıdan görünüşü aşağıdakilerden hangisidir.

- A)  B) 
- C)  D) 