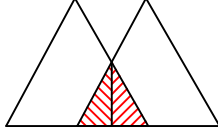




Ad : \_\_\_\_\_  
Soyad : \_\_\_\_\_  
Sınıf: \_\_\_\_\_ No: \_\_\_\_\_

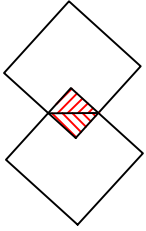
## Test-30

9.

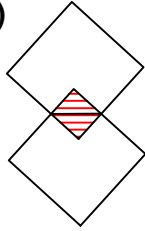


Yukarıda örnek verilen şekile benzerlik gösteren şekil hangisidir?

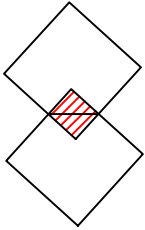
A)



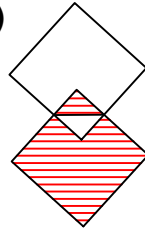
B)



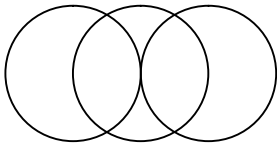
C)



D)



10.



Yukarıda verilen şekilede kaç tane daire vardır?


A) 3

B) 4

C) 5

D) 7

11.



Yukarıdaki resmin bir parçası çıkarılmıştır.  
Çıkarılan parça aşağıdakilerden hangisidir?

A)



B)



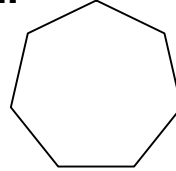
C)



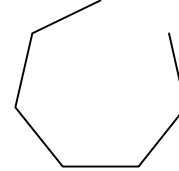
D)



12.



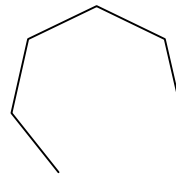
1. Şekil



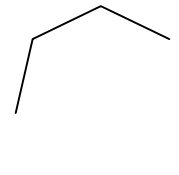
2. Şekil



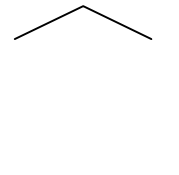
3. Şekil



4. Şekil



5. Şekil



6. Şekil

Yukarıda verilen dizi 1. şekil başlangıç olmak üzere belli bir sıraya göre dizilmiştir.

Buna göre dizinin bozulmaması için hangi iki şekil yer değiştirmelidir ?

A) 3 - 4

B) 3 - 5

C) 2 - 4

D) 1 - 4