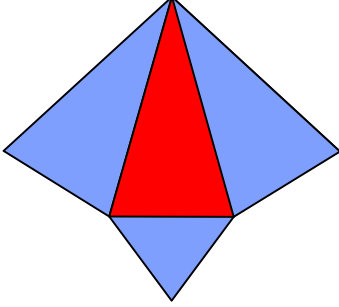




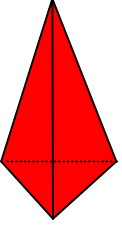
Test-30

5.

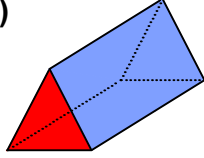


Yukarıda verilen şeklin kapalı durumu aşağıdakilerden hangisi olabilir?

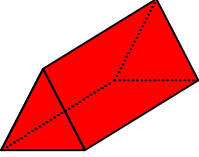
A)



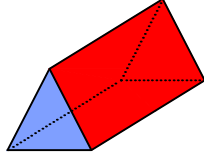
B)



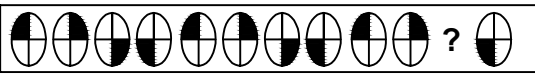
C)



D)



6.



Yukarıda verilen dizi bir sıraya göre dizilmiştir. Buna göre "?" yerne hangi şekil gelmelidir?

A)



B)




C)



D)




7




Aşağıdaki şekillerden handisi yukarıda verilen şekil ile aynıdır ?


A)




B)



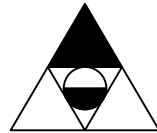
C)



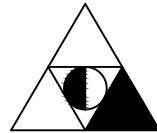
D)



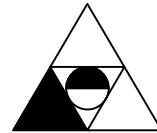
8.



1. Şekil



2. Şekil



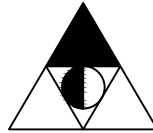
3. Şekil

?

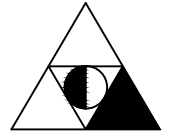
4. Şekil

Yukarıda verilen dizi bir sıraya göre dizilmiştir. Buna göre "?" yerne hangi şekil gelmelidir?

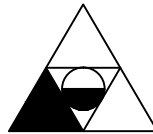
A)



B)



C)



D)

