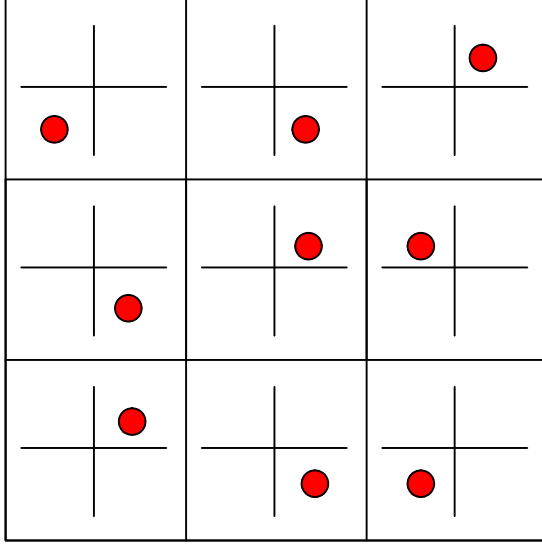




Ad : _____
Soyad : _____
Sınıf : _____ No : _____

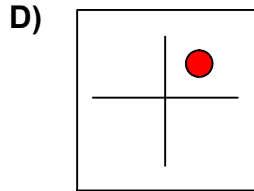
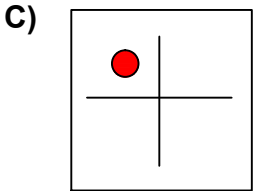
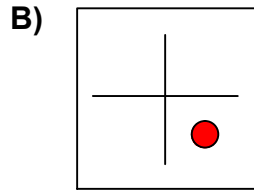
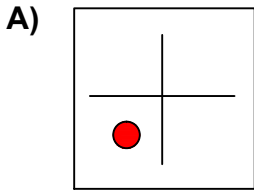
Test-3

8.

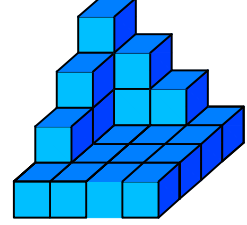
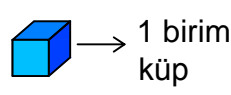


Her sıradaki şekiller belli bir kurala göre dizi oluşturmaktadır.

Buna göre kuralı bozan şekil aşağıdakilerden hangisinde verilmiştir?



9.



Yukarıda verilen şekil aynı büyüklükteki küp bloklardan oluşmaktadır.

Şekilde toplam kaç küp vardı?

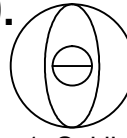
A) 20

B) 23

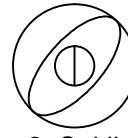
C) 24

D) 26

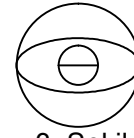
10.



1. Şekil



2. Şekil



3. Şekil

?

4. Şekil

Yukarıda verilen dizi bir sıraya göre dizilmiştir.

Buna göre "?" yerne hangi şekil gelmelidir?

