





Ad : \_\_\_\_\_  
Soyad : \_\_\_\_\_  
Sınıf: \_\_\_\_\_ No: \_\_\_\_\_

## Test-29

5.

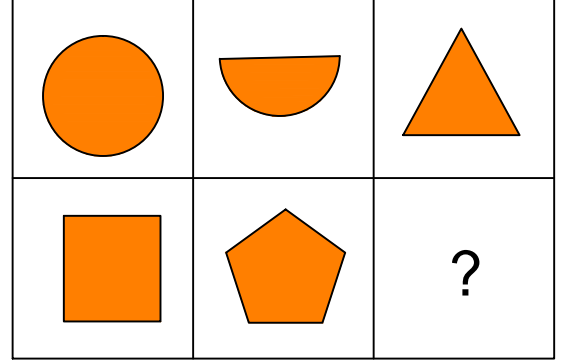


Yukarıda verilen şekili oluşturabilmek için aşağıdaki şekillerden hangi ikisi tamamen kullanılmalıdır ?

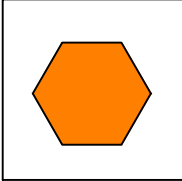

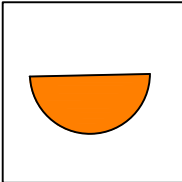


- A) 1 ve 2                      B) 2 ve 3  
C) 3 ve 4                      D) 1 ve 4

6.



Yukarıda verilen şekiller soldan sağa belli bir kurala göre sıralanmıştır. Buna göre "?" kutucuğa aşağıdakilerden hangisi gelmelidir?

- A)                       B)   
C)                       D) 