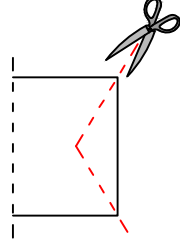
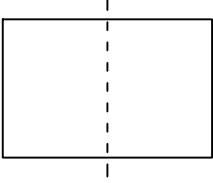




Test-28

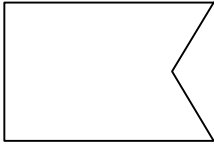
13.



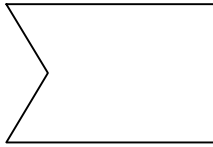
Şekil-1'deki kağıt Şekil-2'deki gibi katlanıp kesikli çizgilerle gösterilen yerlerinden kesiliyor.

Kağıt katlandığı yerden tekrar açıldığında aşağıdaki şekillerden hangisi meydana gelir ?

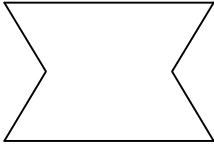
A)



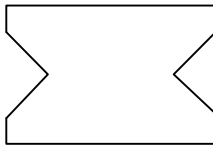
B)



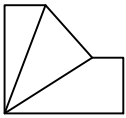
C)



D)



14.



→ 3

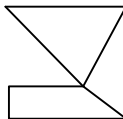


→ 4



→ 5

Yukarıdaki şekil - sayı eşleşmesine göre



→ ?

eşleşmesinde " ? " yerine hangisi getirilmelidir?

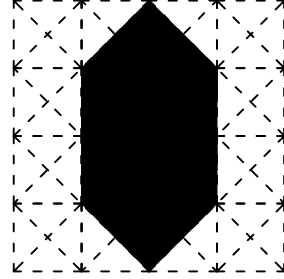
A) 1

B) 2

C) 3


D) 4

15.




Aşağıdaki şekillerden hangisi yukarıda verilen şekil ile aynıdır ?


A)




B)



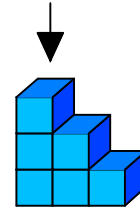
C)



D)



16.



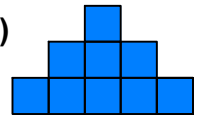
Yukarıda eş birm küplerden oluşan bir şekil görülmektedir.

Bu şeklin yukarıdan görünüşü aşağıdakilerden hangisidir.

A)



B)



C)



D)

