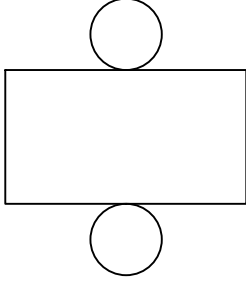





Test-28

9.



Yukarıda verilen şeklin kapalı durumu aşağıdakilerden hangisidir ?

A)



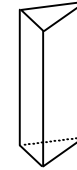
B)



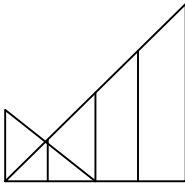
C)



D)



10.



Yukarıda verilen şekilede kaç tane üçgen vardır?

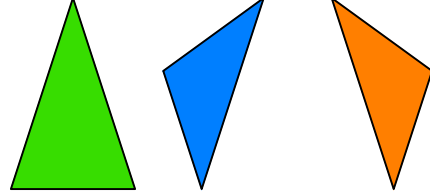
A) 9

B) 7

C) 8

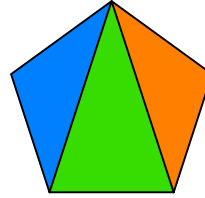
D) 6

11.

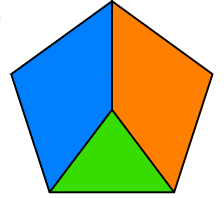


Yukarıda verilen parçalar ile aşağıdaki şekillerden hangisi oluşturulabilir ?

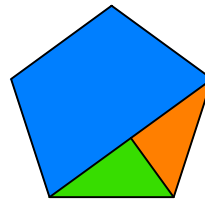
A)



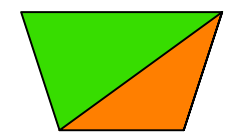
B)



C)



D)



12.



Yukarıdaki resmin bir parçası çıkarılmıştır.
Çıkarılan parça aşağıdakilerden hangisidir?

A)



B)



C)



D)

