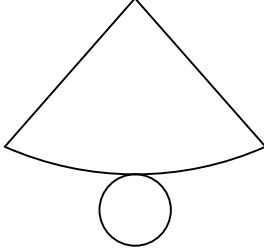




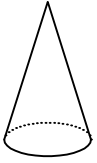
Test-27

4.



Yukarıda verilen şeklin kapalı durumu aşağıdakilerden hangisidir ?

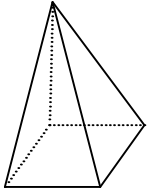
A)



B)



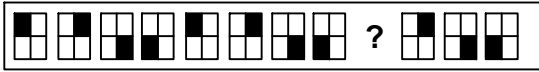
C)



D)



5.



Yukarıda verilen dizi bir sıraya göre dizilmiştir. Buna göre "?" yerne hangi şekil gelmelidir?

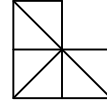
A)

B)

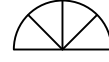
C)

D)

6.



1. Şekil

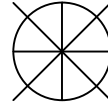


2. Şekil

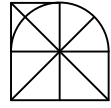
Yukarıda verilen şekiller üst üste getirilmektedir.

Oluşan yeni şekil aşağıdakilerden hangisi olabilir?

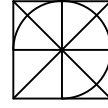
A)



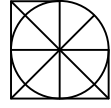
B)



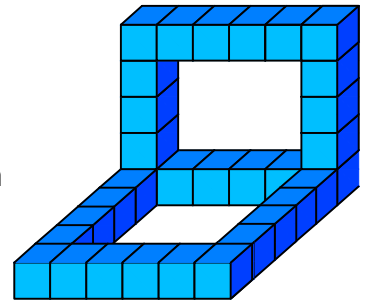
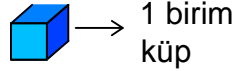
C)



D)



7.



Yukarıda verilen şekil aynı büyüklükteki küp bloklardan oluşmaktadır.

Şekilde toplam kaç küp vardı?

A) 26

B) 28

C) 29

D) 32