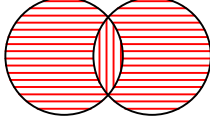


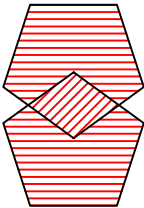
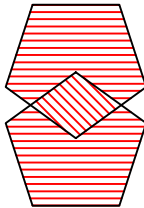
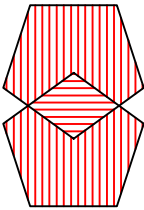
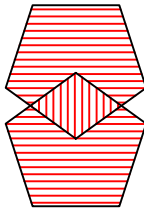


## Test-26

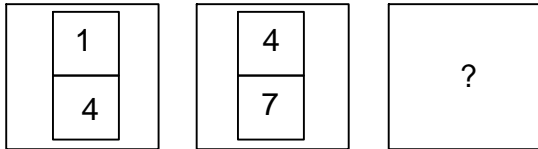
13.



Yukarıda örnek verilen şekile benzerlik gösteren şekil hangisidir?

- A) 
- B) 
- C) 
- D) 

14.



Yukarıda verilen şekiller bir kurala göre dizi oluşturmaktadır.

Buna göre "?" yerine hangi şekil gelmelidir?

- A) 

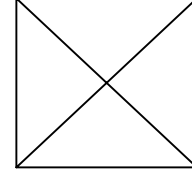
6
10
- B) 

7
11
- C) 

6
11
- D) 

7
10


15.






Yukarıda verilen şekilede kaç tane üçgen vardır?

- A) 4
- B) 6
- C) 5
- D) 7

16.



Aşağıdaki şekillerden hangisi yukarıda verilen şekil ile aynıdır ?

- A) 
- B) 
- C) 
- D) 