




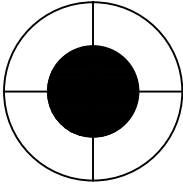
Test-26

1.

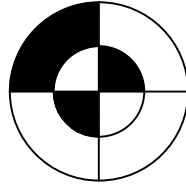


Yukarıdaki şeklin negatifi aşağıdaki şekillerden hangisinde verilmiştir ?


A)



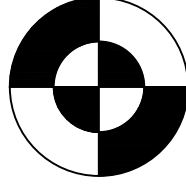
B)



C)



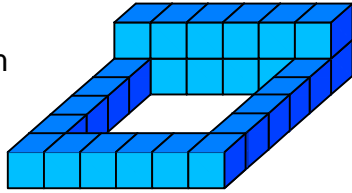
D)



2.



1 birim
küp



Yukarıda verilen şekil aynı büyüklükteki küp bloklardan oluşmaktadır.

Şekilde toplam kaç küp vardı?


A) 26

B) 28

C) 29


D) 31

3.




Aşağıdaki şekillerden hangisi yukarıda verilen şekil ile aynıdır ?


A)




B)



C)



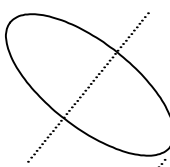
D)



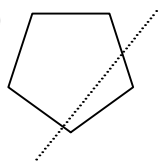
4.

Aşağıdaki seçeneklerde verilen şekiller çizgi boyunca katlandığında üst üste gelen (çakışan) şekil hangisidir.

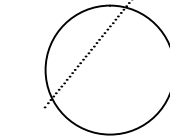
A)



B)



C)



D)

