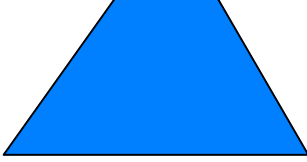




## Test-24

13.



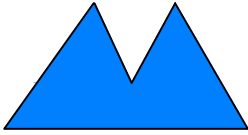
Yukarıda verilen şekili elde edebilmek için aşağıdaki şekillerden hangi ikisi birleştirilmelidir?



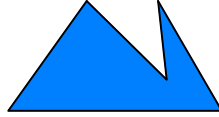
1. Şekil



2. Şekil



3. Şekil



4. Şekil


A) 1 ve 2

B) 3 ve 2

C) 1 ve 3

D) 3 ve 4

14.



Yukarıdaki resmin bir parçası çıkarılmıştır. Çıkarılan parça aşağıdakilerden hangisidir?

A)



B)



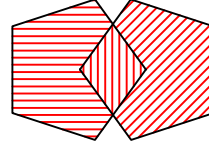
C)



D)

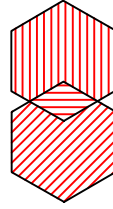


15.

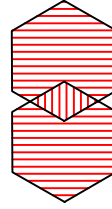


Yukarıda örnek verilen şekile benzerlik gösteren şekil hangisidir?


A)



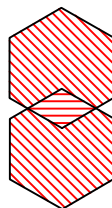
B)




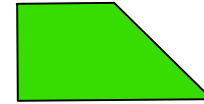
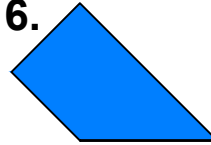
C)



D)

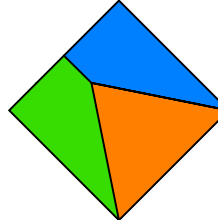


16.

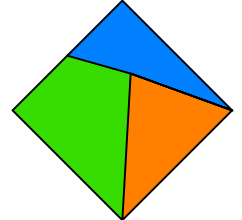


Yukarıda verilen parçalar ile aşağıdaki şekillerden hangisi oluşturulabilir ?

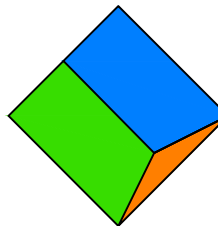
A)



B)



C)



D)

