


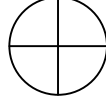


Test-23

8.



1. Şekil




2. Şekil

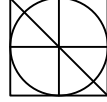
Yukarıda verilen şekiller üst üste getirilmektedir.

Oluşan yeni şekil aşağıdakilerden hangisi olabilir?

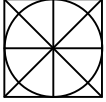
A)



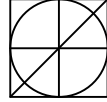
B)




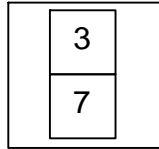
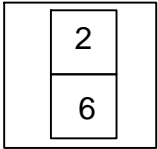
C)



D)



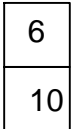
9.




Yukarıda verilen şekiller bir kurala göre dizi oluşturmaktadır.

Buna göre "?" yerine hangi şekil gelmelidir?

A)




B)



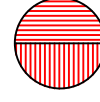
C)



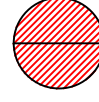
D)



10.



1. Şekil



2. Şekil



3. Şekil



?

1. şekil ve 2. şekil arasında bir ilişki bulunmaktadır.

Benzer ilişki 3. şekil ile hangisi arasında vardır

A)



B)




C)



D)



11.



Yukarıdaki şekiller arasında ortak bir özellik vardır.

Bu ortak özellik aşağıdakilerden hangisinde mevcuttur ?


A)



B)



C)



D)

