




Ad : \_\_\_\_\_  
Soyad : \_\_\_\_\_  
Sınıf: \_\_\_\_\_ No: \_\_\_\_\_

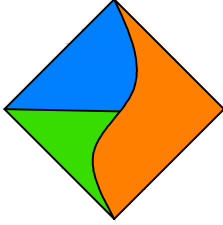
## Test-23

1.

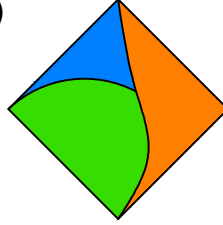


Yukarıda verilen parçalar ile aşağıdaki şekillerden hangisi oluşturulabilir ?

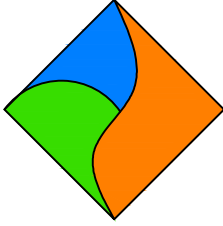
A)



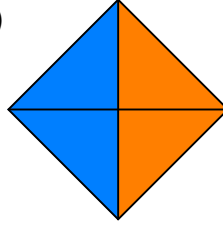
B)



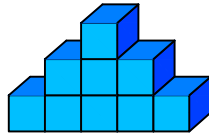
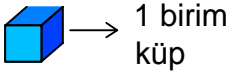
C)



D)



2.



Yukarıda verilen şekil aynı büyüklükteki küp bloklardan oluşmaktadır.

Şekilde toplam kaç küp vardı?

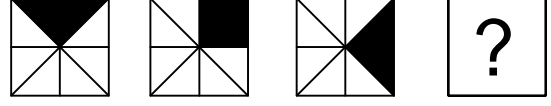
A) 8

B) 9

C) 10

D) 11

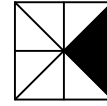
3.



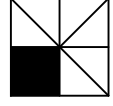
Yukarıda verilen şekiller bir kurala göre sonlu bir şekil dizisi oluşturmaktadır.

Buna göre "?" yerine hangi seçenekteki şekil getirilmelidir?

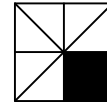
A)



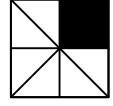
B)



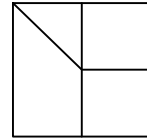
C)



D)



4.



Yukarıda verilen şeklin oluşması için gerekli parçalar hangi seçenekte verilmiştir?

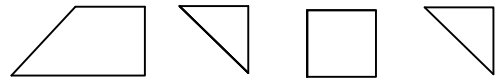
A)



B)



C)



D)

