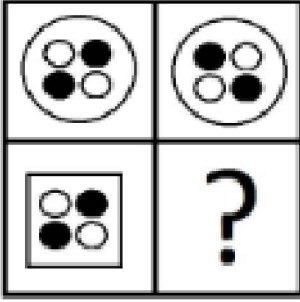




Test-20

12.

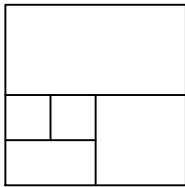


Yukarıdaki şekiller soldan sağa belli bir kurala göre dizilmiştir.

Buna göre "?" olan kutucuğa aşağıdakilerden hangisi gelmelidir ?



13.



Yukarıda verilen şekilede kaç tane kare olmayan dikdörtgen vardır?

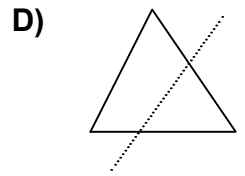
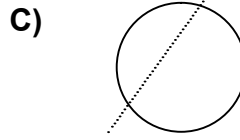
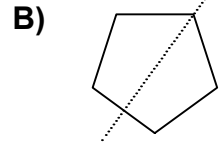
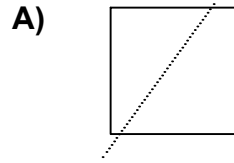
A) 4

B) 3




C) 5

D) 6

14. Aşağıdaki seçeneklerde verilen şekiller çizgi boyunca katlandığında üst üste gelen (çakışan) şekil hangisidir.



15.



Yukarıda verilen parçalar ile aşağıdaki şekillerden hangisi oluşturulabilir ?

