





Ad : \_\_\_\_\_  
Soyad : \_\_\_\_\_  
Sınıf: \_\_\_\_\_ No: \_\_\_\_\_

## Test-20

8.



1. Şekil



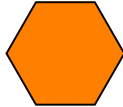
2. Şekil



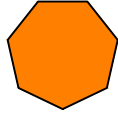
3. Şekil



4. Şekil



5. Şekil



6. Şekil

Yukarıda verilen dizi 1. şekil başlangıç olmak üzere belli bir sıraya göre dizilmiştir.

**Buna göre dizinin bozulmaması için hangi iki şekil yer değiştirmelidir ?**

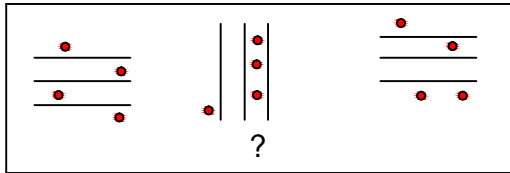
A) 2 - 5

B) 3 - 5

C) 2 - 4

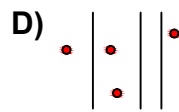
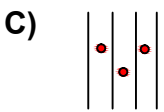
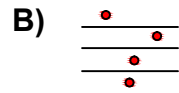
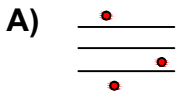
D) 3 - 2

9.

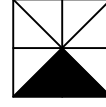


Yukarıdaki şekil grubunda ortak bir özellik vardır.

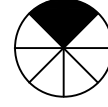
**Bu özellik aşağıdakilerden hangisinde vardır?**



10.



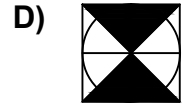
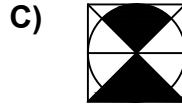
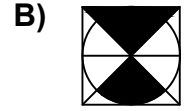
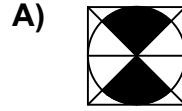
1. Şekil






2. Şekil

Yukarıda verilen şekiller üst üste getirilmektedir.

**Oluşan yeni şekil aşağıdakilerden hangisi olabilir?**



11.



Kağıt yukarıdaki şekildeki gibi katlanıp bir delik çalıyor.

**Kağıt geri açıldığında oluşan yeni şekil aşağıdakilerden hangisi olur?**

