





Test-20

1.




Yukarıda verilen şekili elde edebilmek için aşağıdaki şekillerden hangi ikisi birleştirilmelidir?




1. Şekil



2. Şekil



3. Şekil



4. Şekil

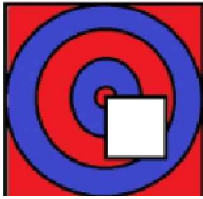
A) 1 ve 2

B) 3 ve 2

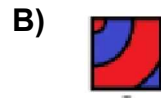
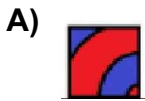
C) 1 ve 3

D) 1 ve 4


2.




Yukarıdaki resmin bir parçası çıkarılmıştır.
Çıkarılan parça aşağıdakilerden hangisidir?



3.

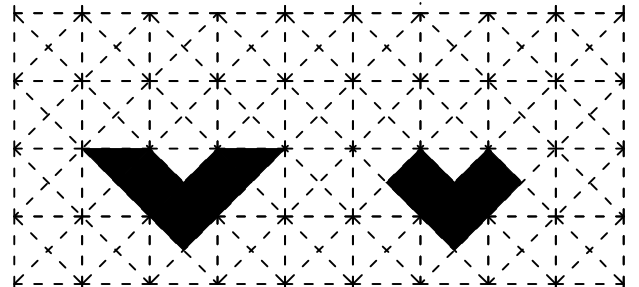


Yukarıda verilen şekili oluşturabilmek için aşağıdaki şekillerden hangi ikisi tamamen kullanılmalıdır ?



1. Şekil

2. Şekil



3. Şekil

4. Şekil

A) 1 ve 2

B) 1 ve 3

C) 2 ve 3

D) 1 ve 4