




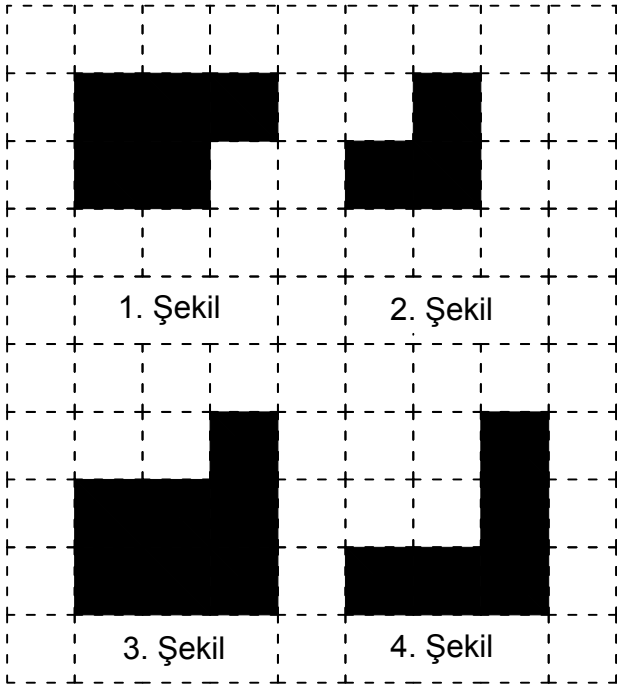
Ad : \_\_\_\_\_  
Soyad : \_\_\_\_\_  
Sınıf: \_\_\_\_\_ No: \_\_\_\_\_

## Test-2

13.



Yukarıda verilen şekli oluşturabilmek için aşağıdaki şekillerden hangi ikisi tamamen kullanılmalıdır ?



A) 1 ve 2

B) 1 ve 3

C) 3 ve 4

D) 1 ve 4

14.



Yukarıdaki şekil aşağıdaki şekillerden hangisi ile birleşirse bir üçgen oluşur ?

A)



B)



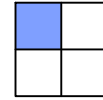
C)



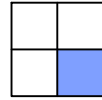
D)



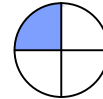
15.



1. Şekil



2. Şekil



3. Şekil

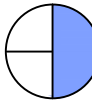


?

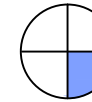
1. şekil ve 2. şekil arasında bir ilişki bulunmaktadır.

**Benzer ilişki 3. şekil ile hangisi arasında vardır**

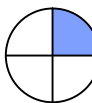
A)



B)



C)



D)

