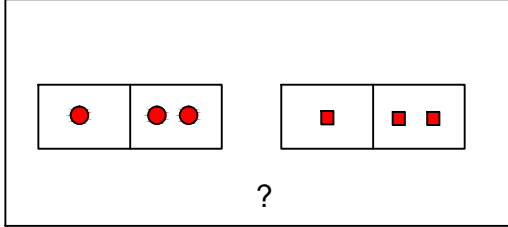





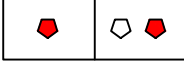

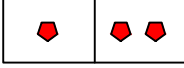
## Test-2

9.

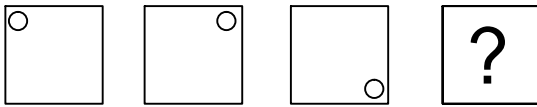


Yukarıdaki şekil grubunda ortak bir özellik vardır.

**Bu özellik aşağıdakilerden hangisinde vardır?**

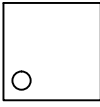
- A)  B) 
- C)  D) 

10.

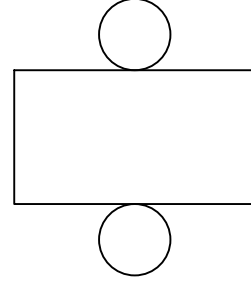


Yukarıda verilen şekiller bir kurala göre sonlu bir şekil dizisi oluşturmaktadır.


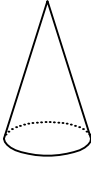
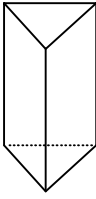
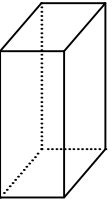
**Buna göre "?" yerine hangi seçenekteki şekil getirilmelidir?**

- A)  B) 
- C)  D) 

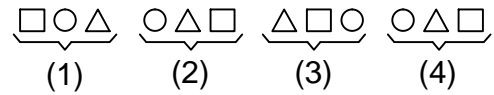
11.



**Yukarıda verilen şeklin kapalı durumu aşağıdakilerden hangisidir ?**

- A)  B) 
- C)  D) 

12.



Yukarıda verilen dizi bir sıraya göre dizilmiştir.

**Dizilerden sırayı bozan hangisidir?**

- A) 1 B) 2  
C) 3 D) 4