



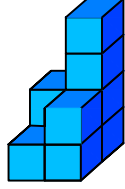
Ad : _____
Soyad : _____
Sınıf: _____ No: _____

Test-2

5.



1 birim
küp

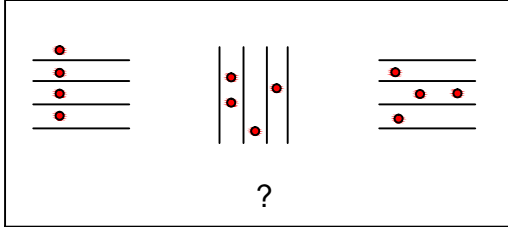


Yukarıda verilen şekil aynı büyüklükteki küp
bloklardan oluşmaktadır.

Şekilde toplam kaç küp vardı?


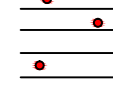

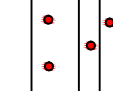
- A) 7 B) 8
C) 9 D) 10

6.

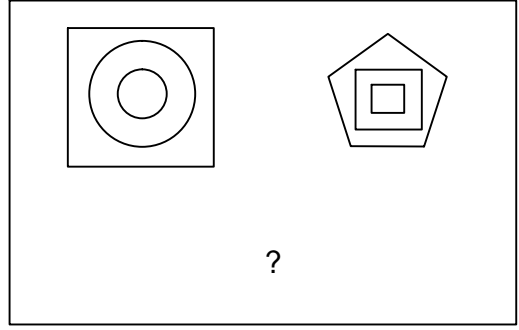


Yukarıdaki şekil grubunda ortak bir özellik
vardır.

Bu özellik aşağıdakilerden hangisinde
vardır?


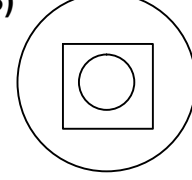
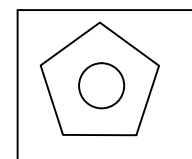
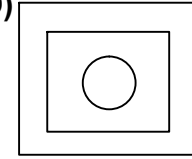
- A)  B) 
C)  D) 

7.



Yukarıdaki şekil grubunda ortak bir özellik
vardır.

Bu özellik aşağıdakilerden hangisinde
vardır?

- A)  B) 
C)  D) 

8.



Yukarıda verilen dizi bir sıraya göre dizilmiştir.

Buna göre "?" yerne hangi şekil
gelmelidir?

- A)  B) 
C)  D) 