




Ad : _____
Soyad : _____
Sınıf: _____ No: _____

Test-19

8.



Yukarıdaki şekiller soldan sağa belli bir kurala göre dizilmiştir.

Buna göre "?" olan kutucuğa aşağıdakilerden hangisi gelmelidir ?

A)



B)



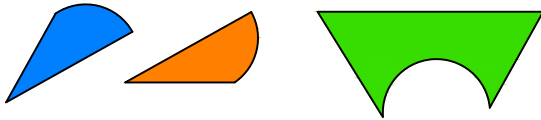
C)



D)

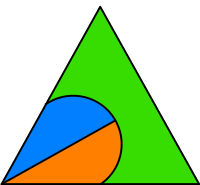


9.

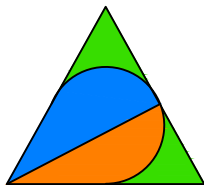


Yukarıda verilen parçalar ile aşağıdaki şekillerden hangisi oluşturulabilir ?

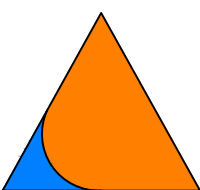
A)



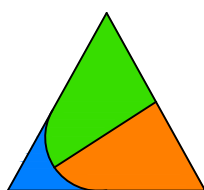
B)



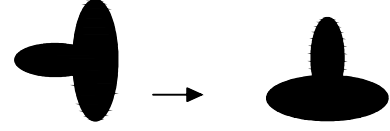
C)




D)




10.



1. Şekil



2. Şekil



3. Şekil

?

1. şekil ve 2. şekil arasında bir ilişki bulunmaktadır.

Benzer ilişki 3. şekil ile hangisi arasında vardır

A)



B)



C)



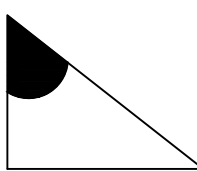
D)



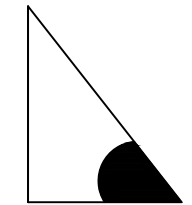
11.

Bir şeklin etrafında döndürülerek oluşturulan aşağıdaki şekillerden hangisi diğerlerinden farklıdır ?

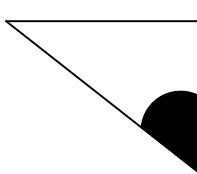
A)



B)



C)



D)

