
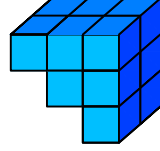




Test-19



1.  → 1 birim küp




Yukarıda verilen şekil aynı büyüklükteki küp bloklardan oluşmaktadır.


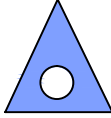
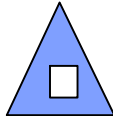
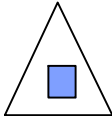
Şekilde toplam kaç küp vardı?

- A) 10 B) 12
C) 14 D) 16

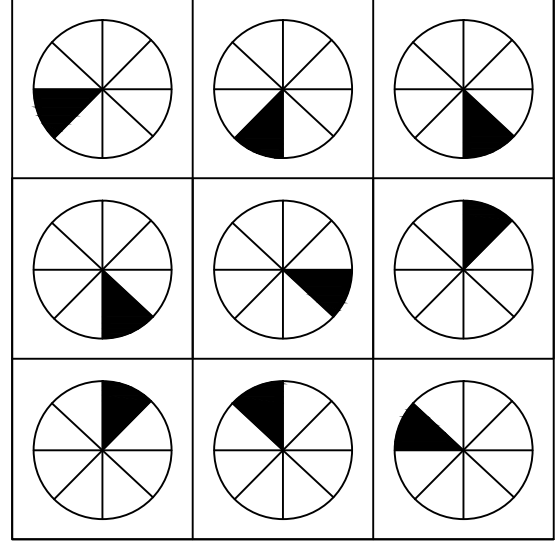
2.  → 
1. Şekil 2. Şekil

 → ?
3. Şekil

1. şekil ve 2. şekil arasında bir ilişki bulunmaktadır.
Benzer ilişki 3. şekil ile hangisi arasında vardır

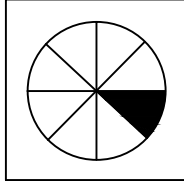
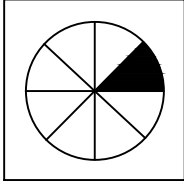
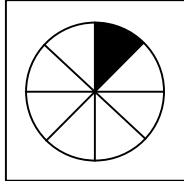
- A)  B) 
C)  D) 

3.



Her sıradaki şekiller belli bir kurala göre dizi oluşturmaktadır.

Buna göre kuralı bozan şekil aşağıdakilerden hangisinde verilmiştir?

- A)  B) 
C)  D) 