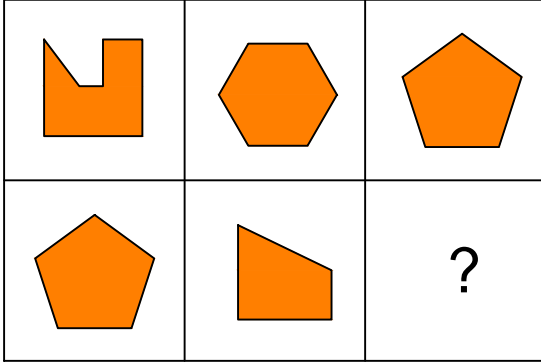


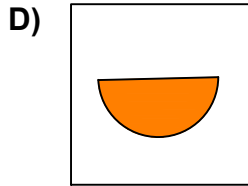
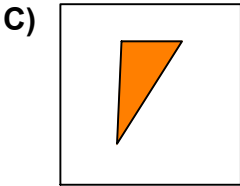
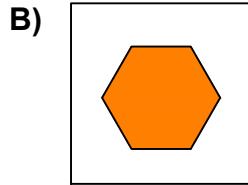
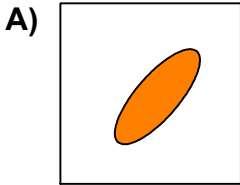


Test-18


11.



Yukarıda verilen şekiller soldan sağa belli bir kurala göre sıralanmıştır.
Buna göre "?" kutucuğa aşağıdakilerden hangisi gelmelidir?



12.



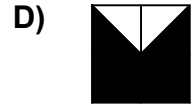
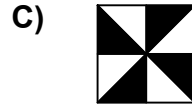
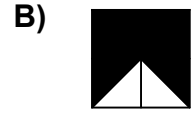
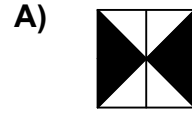
1. Şekil



2. Şekil

Yukarıda verilen şekiller üst üste getirilmektedir.

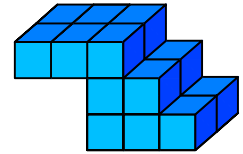
Oluşan yeni şekil aşağıdakilerden hangisi olabilir?



13.



→ 1 birim
küp



Yukarıda verilen şekil aynı büyüklükteki küp bloklardan oluşmaktadır.

Şekilde toplam kaç küp vardı?

A) 14

B) 17

C) 16

D) 18