





Test-18


5.




Yukarıda verilen şekili elde edebilmek için aşağıdaki şekillerden hangi ikisi birleştirilmelidir?




1. Şekil



2. Şekil



3. Şekil

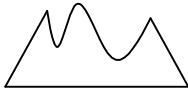


4. Şekil

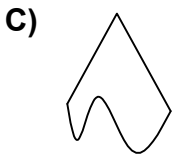
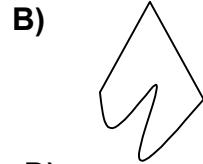
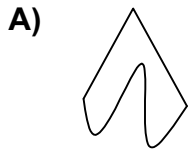
- A) 1 ve 2
C) 1 ve 3

- B) 3 ve 2
D) 1 ve 4

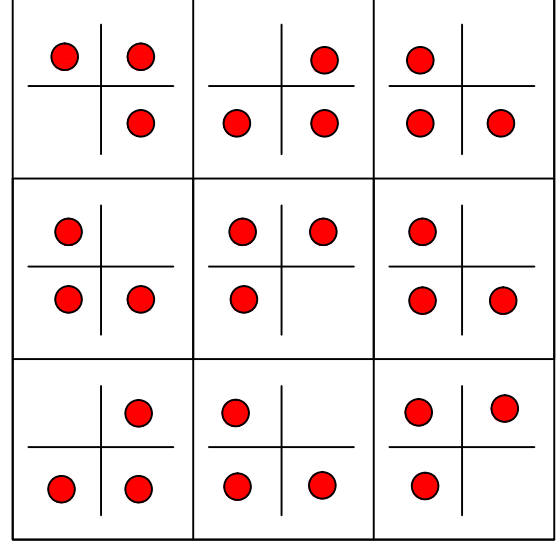
6.



Yukarıdaki şekil aşağıdaki şekillerden hangisi ile birleşirse bir üçgen oluşur ?



7.



Her sıradaki şekiller belli bir kurala göre dizi oluşturmaktadır.

Buna göre kuralı bozan şekil aşağıdakilerden hangisinde verilmiştir?

