




Ad : _____
Soyad : _____
Sınıf: _____ No: _____

Test-17


9.




1. Şekil



2. Şekil




3. Şekil



4. Şekil



5. Şekil



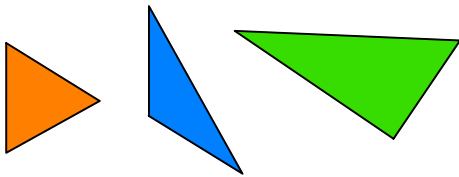
6. Şekil

Yukarıda verilen şekiller ikiye ayrılarak benzer özelliklere sahiptir.

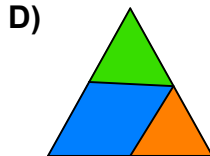
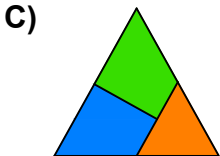
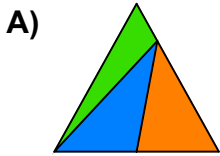
Buna göre benzer özellik taşıyan şekiller aşağıdakilerden hangisinde doğru olarak gruplanmıştır?

- A) 2,4 - 1,5 - 3,6
- B) 1,6 - 2,4 - 3,5
- C) 2,4 - 1,1 - 3,6
- D) 2,6 - 1,5 - 3,4

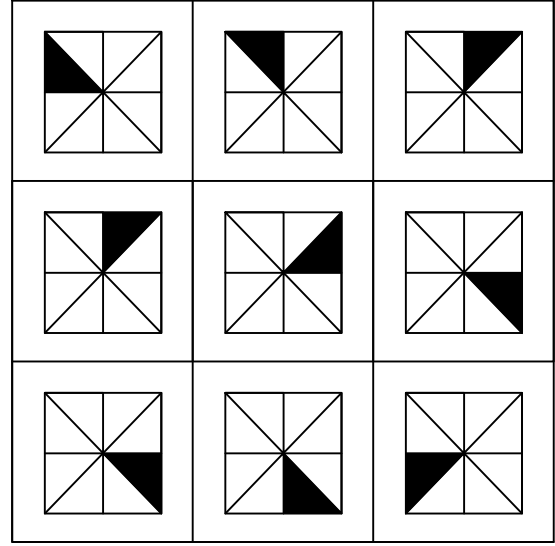
10.



Yukarıda verilen parçalar ile aşağıdaki şekillerden hangisi oluşturulabilir ?



11.



Her sıradaki şekiller belli bir kurala göre dizi oluşturmaktadır.

Buna göre kuralı bozan şekil aşağıdakilerden hangisinde verilmiştir?

