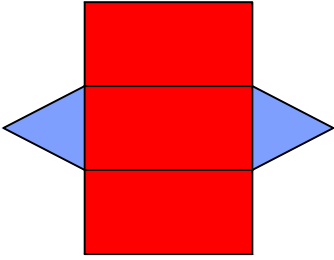




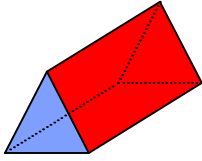
Test-17

1.

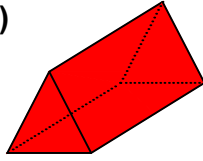


Yukarıda verilen şeklin kapalı durumu aşağıdakilerden hangisidir ?

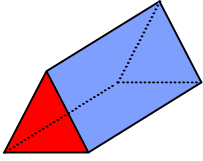
A)



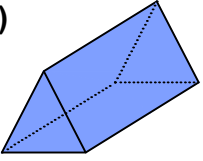
B)



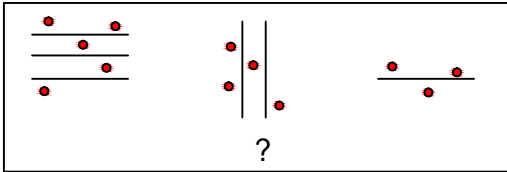
C)



D)



2.



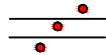
Yukarıdaki şekil grubu ortak bir özelliğe göre sıralanmıştır.

Buna göre "?" olan kısma aşağıdaki şekillerden hangisi gelmelidir?

A)



B)



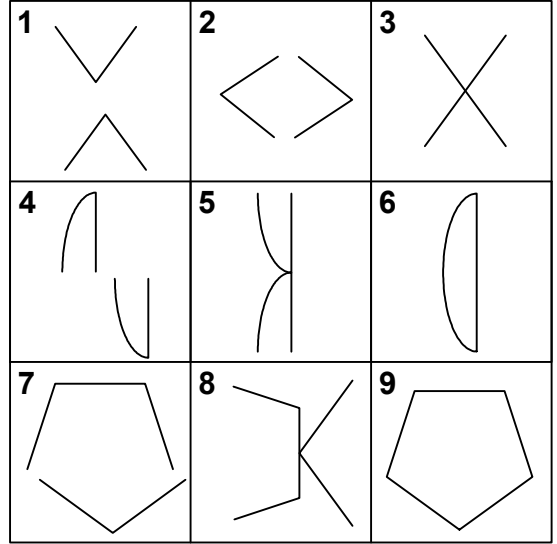
C)



D)



3.



Yukarıda verilen şekiller soldan sağa belli bir kurala göre sıralanmıştır.

Buna göre kuralı bozan şekil kaç numaralı şekildedir?

A) 2

B) 5

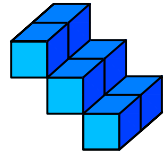
C) 6

D) 8

4.



1 birim
küp



Yukarıda verilen şekil aynı büyüklükteki küp bloklardan oluşmaktadır.

Şekilde toplam kaç küp vardı?

A) 4

B) 6

C) 5

D) 7