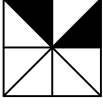


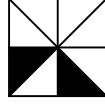


## Test-16

11.



1. Şekil




2. Şekil


Yukarıda verilen şekiller üst üste getirilmektedir.

**Oluşan yeni şekil aşağıdakilerden hangisi olabilir?**

A)



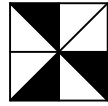
B)



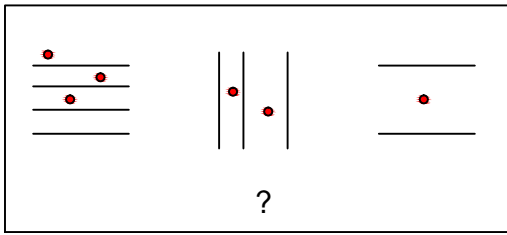
C)



D)




12.



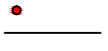
Yukarıdaki şekil grubu ortak bir özelliğe göre sıralanmıştır.

**Buna göre "?" olan kısma aşağıdaki şekillerden hangisi gelmelidir?**


A)



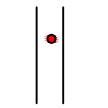
B)



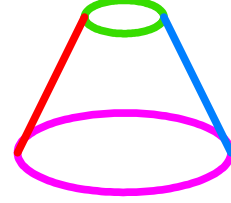
C)



D)



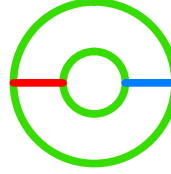
13.



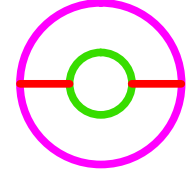
Yukarıda üç boyutlu bir geometrik cismin resmi gözükmektedir.

**Bu şeklin yukarıdan görünüşü aşağıdaki şekillerden hangisidir?**

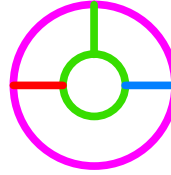
A)



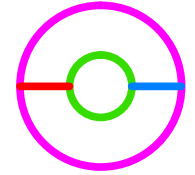
B)



C)

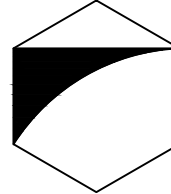


D)

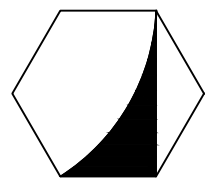


14. Bir şeklin etrafında döndürülerek oluşturulan aşağıdaki şekillerden hangisi diğerlerinden farklıdır ?

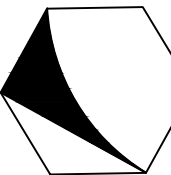
A)



B)



C)



D)

