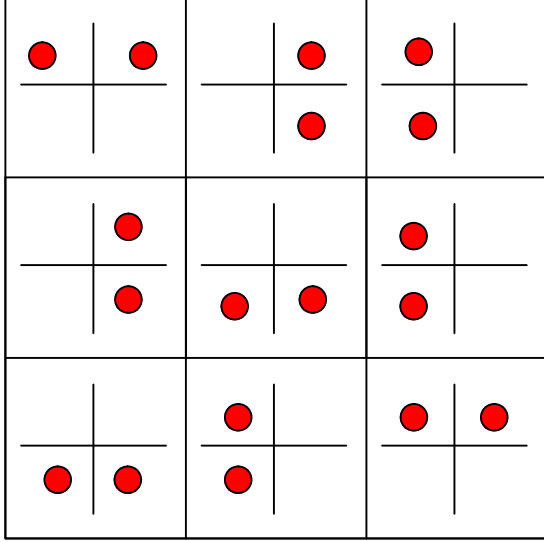




Ad : _____
Soyad : _____
Sınıf : _____ No : _____

Test-15

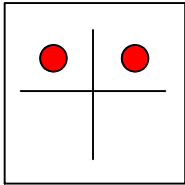
9.



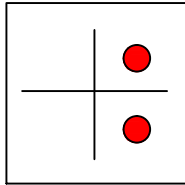
Her sıradaki şekiller belli bir kurala göre dizi oluşturmaktadır.

Buna göre kuralı bozan şekil aşağıdakilerden hangisinde verilmiştir?

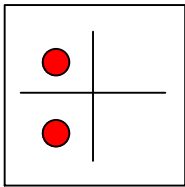
A)



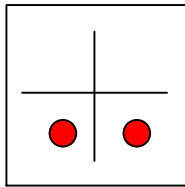
B)



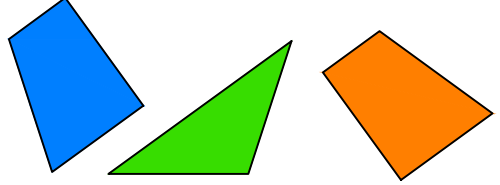
C)



D)

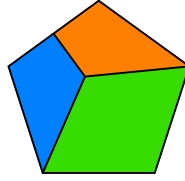


10.

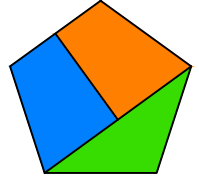


Yukarıda verilen parçalar ile aşağıdaki şekillerden hangisi oluşturulabilir ?

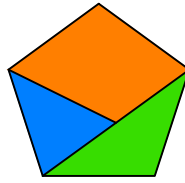
A)



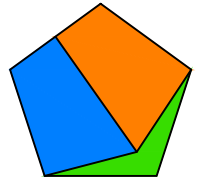
B)



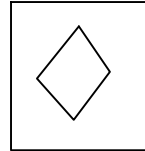
C)



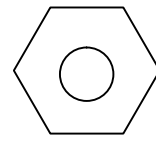
D)



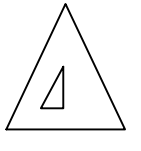
11.



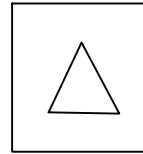
1. Şekil



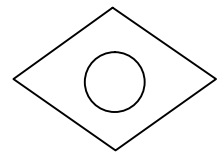
2. Şekil



3. Şekil



4. Şekil



5. Şekil

Yukarıda verilen şekillerden iki tanesi benzer özelliklere sahiptir.

Buna göre benzer özelliklere sahip olan şekiller aşağıdakilerden hangisinde doğru olarak verilmiştir?

A) 1 ve 2

B) 1 ve 5

C) 4 ve 5

D) 1 ve 3