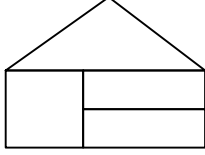




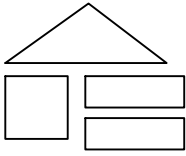
Test-15

5.

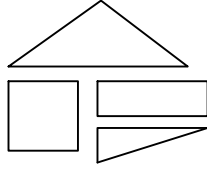


Yukarıda verilen şeklin oluşması için gerekli parçalar hangi seçenekte verilmiştir?

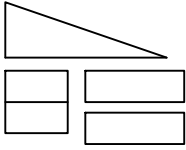
A)



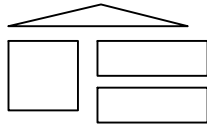
B)



C)



D)



6.



1. Şekil



2. Şekil



3. Şekil



?

1. şekil ve 2. şekil arasında bir ilişki bulunmaktadır.

Benzer ilişki 3. şekil ile hangisi arasında vardır

A)



B)



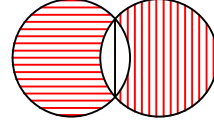
C)



D)

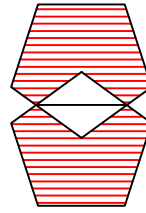


7.

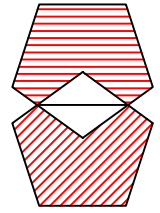


Yukarıda örnek verilen şekile benzerlik gösteren şekil hangisidir?

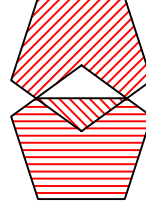
A)



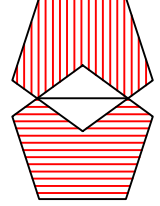
B)



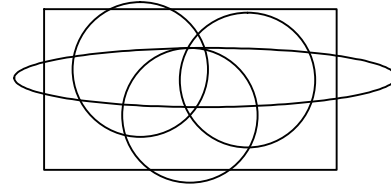
C)



D)



8.



Yukarıda verilen şekilede kaç tane daire vardır?

A) 3

B) 2

C) 5

D) 4