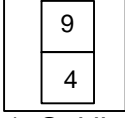
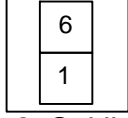
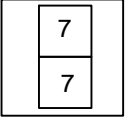
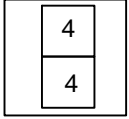
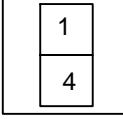
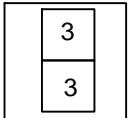
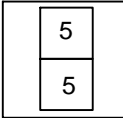



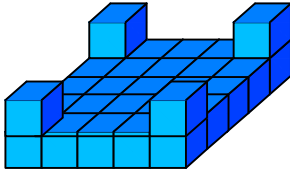


## Test-15

1.  →   
1. Şekil 2. Şekil
-  → ?  
3. Şekil

1. şekil ve 2. şekil arasında bir ilişki bulunmaktadır.  
**Benzer ilişki 3. şekil ile hangisi arasında vardır**

- A)  B) 
- C)  D) 

2.  → 1 birim küp
- 

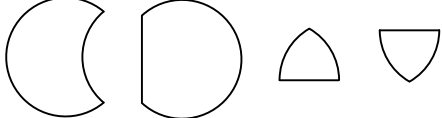
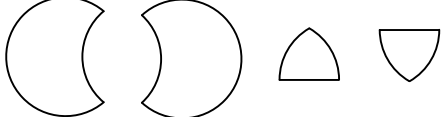
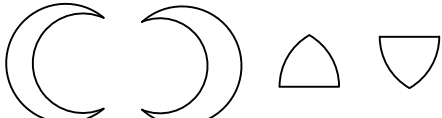

Yukarıda verilen şekil aynı büyüklükteki küp bloklardan oluşmaktadır.

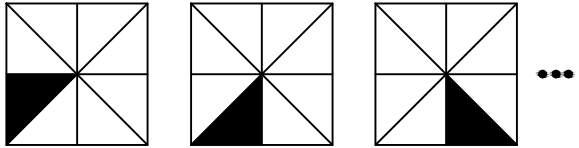
**Şekilde toplam kaç küp vardı?**

- A) 26 B) 28  
C) 29 D) 31

3. 

Yukarıda verilen şeklin oluşması için gerekli parçalar hangi seçenekte verilmiştir?

- A) 
- B) 
- C) 
- D) 

4. 

1. Şekil 2. Şekil 3. Şekil

Yukarıda verilen şekil dizisi belli bir kurala göre sıralanmıştır.

**Bu kurala göre birinci şekil kaçınıncı şekilde yenilenir?**

- A) 8 B) 10  
C) 9 D) 11